


Your name: _____

Elapsed Time

Nearest Minute




Complete the table by filling in the elapsed times.

| Start Time | End Time | Elapsed Time |
|--|------------|-----------------------|
| 6:00 A.M. | 7:55 A.M. | 1 hour and 55 minutes |
| 1:00 P.M. | 3:44 P.M. | |
|  ~ PREVIEW ~ Please log in or register to download the printable version of this worksheet. | | |
| 4:35 A.M. | 11:25 A.M. | |
| 2:04 P.M. | 2:55 P.M. | |
| 5:25 A.M. | 6:20 A.M. | |
| Midnight | 2:35 A.M. | |
| 2:58 P.M. | 4:37 P.M. | |


ANSWER KEY

Elapsed Time

Nearest Minute



Complete the table by filling in the elapsed times.

| Start Time | End Time | Elapsed Time | |
|---|------------|--------------------------------------|--------------|
| 6:00 A.M. | 7:55 A.M. | 1 hour and 55 minutes | |
| 1:00 P.M. | 3:44 P.M. | <u>2 hours and 44 minutes</u> | |
|  | | | <u>notes</u> |
| | | | <u>notes</u> |
| 4:35 A.M. | 11:25 A.M. | <u>6 hours and 50 minutes</u> | |
| 2:04 P.M. | 2:55 P.M. | <u>51 minutes</u> | |
| 5:25 A.M. | 6:20 A.M. | <u>55 minutes</u> | |
| Midnight | 2:35 A.M. | <u>2 hours and 35 minutes</u> | |
| 2:58 P.M. | 4:37 P.M. | <u>1 hour and 39 minutes</u> | |