

Name: \_\_\_\_\_

## Division


$$3 \overline{)352}$$

$$9 \overline{)857}$$

$$5 \overline{)692}$$

$$7 \overline{)264}$$

$$4 \overline{)565}$$



# Preview

Please log in to download  
the printable version of this worksheet.



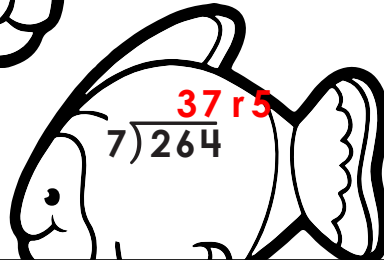
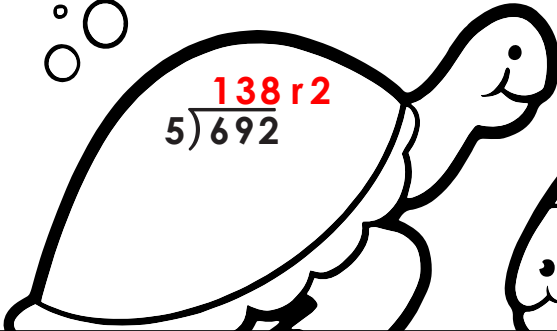
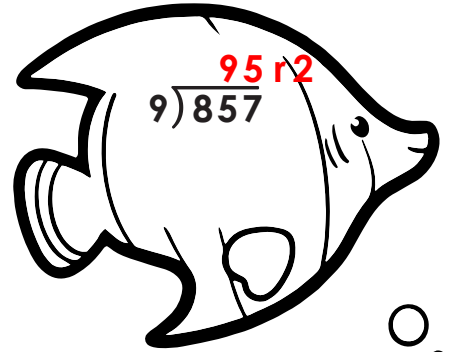
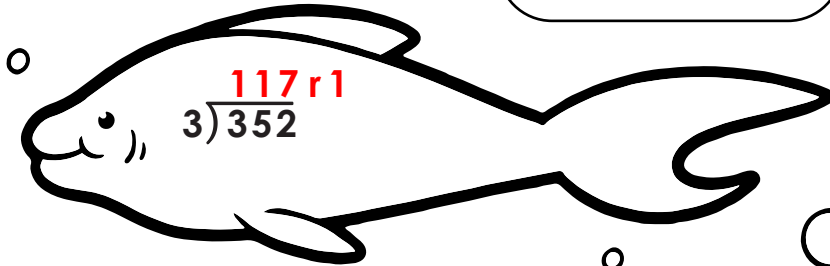
$$3 \overline{)476}$$

$$7 \overline{)648}$$

$$6 \overline{)815}$$

$$6 \overline{)987}$$

## Division



# Preview

Please log in to download the printable version of this worksheet.

