

Name: _____

Counting Quarters

Count the money and write the amounts.

a.



b.



c.



d.



e.



f.



g.



h.



i.



j.



k.




ANSWER KEY

Counting Quarters

Count the money and write the amounts.


a.  **\$1.00**

b.  **\$0.50**

c.  **\$0.25**


d.  **\$1.00**


e.  **\$0.75**


f.  **\$0.50**

g.  **\$0.50**

h.  **\$1.00**

i.  **\$0.75**

j.  **\$1.00**

k.  **\$0.75**