

Name: \_\_\_\_\_

Counting Money Up to \$5

# Counting Money



3



2



1



2



0

How much money in all?

\_\_\_\_\_



2



0



2



0



8

How much money in all?

\_\_\_\_\_



0



0



2



3



7

How much money in all?

\_\_\_\_\_



4



1



4



0



4

How much money in all?

\_\_\_\_\_



1



4



1



3



1

How much money in all?

\_\_\_\_\_



1



1



5



5

































9

How much money in all?

\_\_\_\_\_

# ANSWER KEY

## Counting Money

 3  2  1  2  0 How much money in all? <b><u>\$3.70</u></b>	 2  0  2  0  8 How much money in all? <b><u>\$2.28</u></b>	 0  0  2  3  7 How much money in all? <b><u>\$0.42</u></b>
 4  1  4  0  4 How much money in all? <b><u>\$4.69</u></b>	 1  4  1  3  1 How much money in all? <b><u>\$2.26</u></b>	 1  1  5  5  9 How much money in all? <b><u>\$2.09</u></b>