

Name: \_\_\_\_\_


Up to \$12

# Comparing Money

Write the amount shown by each set of money.  
Then, compare the sets of money using the symbols:  $<$ ,  $>$ , or  $=$ .



compare:  $<$ ,  $>$ ,  $=$



total: \_\_\_\_\_

total: \_\_\_\_\_




compare:  $<$ ,  $>$ ,  $=$



# Preview

Please log in to download the printable version of this worksheet.



total: \_\_\_\_\_

total: \_\_\_\_\_



compare:  $<$ ,  $>$ ,  $=$



total: \_\_\_\_\_



total: \_\_\_\_\_

## Comparing Money

Write the amount shown by each set of money.  
Then, compare the sets of money using the symbols:  $<$ ,  $>$ , or  $=$ .




compare:  $<$ ,  $>$ ,  $=$




# Preview

Please log in to download the printable version of this worksheet.



compare:  $<$ ,  $>$ ,  $=$



total:     **\$7.34**    

total:     **\$8.12**