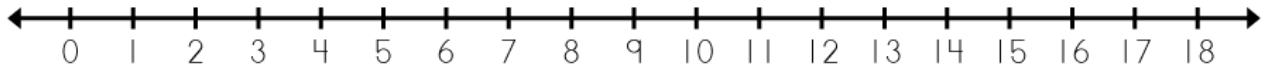


Name: \_\_\_\_\_

## Number Line Addition

Use the number line to solve.

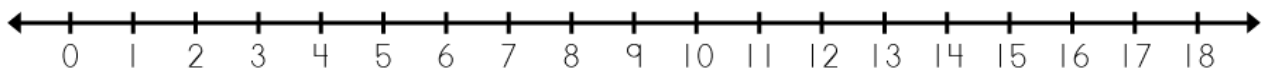


a.  $6 + 3 = \underline{9}$       b.  $8 + 8 = \underline{\quad}$       c.  $4 + 7 = \underline{\quad}$

d.  $5 + 5 = \underline{\quad}$       e.  $3 + 9 = \underline{\quad}$       f.  $1 + 6 = \underline{\quad}$

g.  $2$

Use th



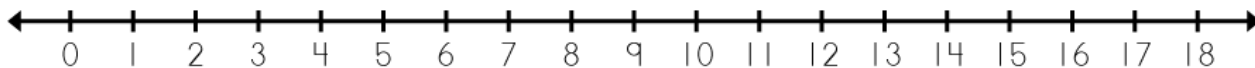
j. 
$$\begin{array}{r} 8 \\ + 8 \\ \hline 16 \end{array}$$
      k. 
$$\begin{array}{r} 6 \\ + 2 \\ \hline \end{array}$$
      l. 
$$\begin{array}{r} 2 \\ + 5 \\ \hline \end{array}$$
      m. 
$$\begin{array}{r} 3 \\ + 9 \\ \hline \end{array}$$
      n. 
$$\begin{array}{r} 7 \\ + 3 \\ \hline \end{array}$$

o. 
$$\begin{array}{r} 1 \\ + 4 \\ \hline \end{array}$$
      p. 
$$\begin{array}{r} 4 \\ + 7 \\ \hline \end{array}$$
      q. 
$$\begin{array}{r} 9 \\ + 1 \\ \hline \end{array}$$
      r. 
$$\begin{array}{r} 5 \\ + 6 \\ \hline \end{array}$$
      s. 
$$\begin{array}{r} 6 \\ + 8 \\ \hline \end{array}$$

# ANSWER KEY

## Number Line Addition

Use the number line to solve.



a.  $6 + 3 = \underline{9}$       b.  $8 + 8 = \underline{16}$       c.  $4 + 7 = \underline{11}$

d.  $5 + 5 = \underline{10}$       e.  $3 + 9 = \underline{12}$       f.  $1 + 6 = \underline{7}$

g. 2

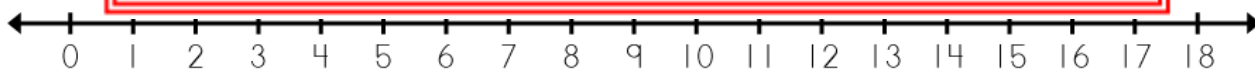
Use th



**PREVIEW**

Please log in or register to download the printable version of this worksheet.

7



j. 
$$\begin{array}{r} 8 \\ + 8 \\ \hline 16 \end{array}$$

k. 
$$\begin{array}{r} 6 \\ + 2 \\ \hline 8 \end{array}$$

l. 
$$\begin{array}{r} 2 \\ + 5 \\ \hline 7 \end{array}$$

m. 
$$\begin{array}{r} 3 \\ + 9 \\ \hline 12 \end{array}$$

n. 
$$\begin{array}{r} 7 \\ + 3 \\ \hline 21 \end{array}$$

o. 
$$\begin{array}{r} 1 \\ + 4 \\ \hline 5 \end{array}$$

p. 
$$\begin{array}{r} 4 \\ + 7 \\ \hline 28 \end{array}$$

q. 
$$\begin{array}{r} 9 \\ + 1 \\ \hline 8 \end{array}$$

r. 
$$\begin{array}{r} 5 \\ + 6 \\ \hline 11 \end{array}$$

s. 
$$\begin{array}{r} 6 \\ + 8 \\ \hline 14 \end{array}$$