



Name: _____

Dancing Pig Addition



Hamton



Punchy

Add to find the sums of the

1. Pinky + Porkchop
2. Porkchop + Baykin
3. Petunia + Hamton
4. Jimmy-Dean + Pinky
5. Punchy + Pinky
6. Hamton + Jimmy-Dean
7. Baykin + Punchy

answer: _____

answer: _____

answer: _____

answer: _____

answer: _____

answer: _____






PREVIEW
Please log in or register to download the printable version of this worksheet.

ANSWER KEY

Dancing Pig Addition



Hamton



Punchy

Add to find the sums of the

1. Pinky + Porkchop
2. Porkchop + Baykin
3. Petunia + Hamton
4. Jimmy-Dean + Pinky
5. Punchy + Pinky
6. Hamton + Jimmy-Dean
7. Baykin + Punchy



answer: **629**

answer: **421**

answer: **1,205**

answer: **650**

answer: **684**

answer: **260**