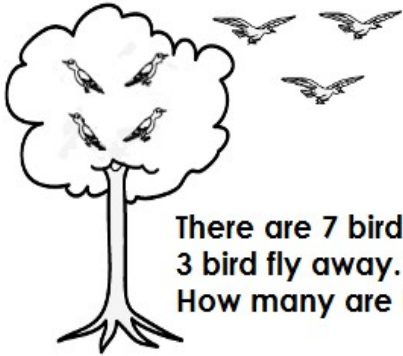



Name: \_\_\_\_\_

# Subtraction





There are 7 birds in a tree.  
3 birds fly away.  
How many are left?

$$\underline{7} - \underline{3} = \underline{\quad}$$



There are 6 dogs.  
3 run away.  
How many are left?

$$\underline{\quad} - \underline{\quad} = \underline{\quad}$$






## ~ PREVIEW ~


Please log in or register to download the printable version of this worksheet.

ft?



There are 5 baby birds in a nest.  
2 jump out.  
How many are left?

$$\underline{\quad} - \underline{\quad} = \underline{\quad}$$



There are 7 rabbits.  
5 hop away.  
How many are left?

$$\underline{\quad} - \underline{\quad} = \underline{\quad}$$