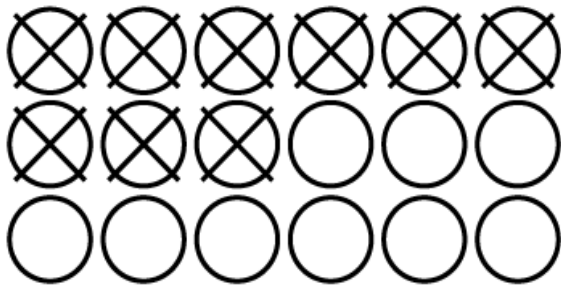


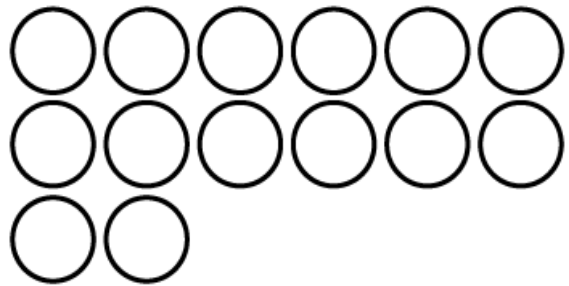
Name: \_\_\_\_\_

# Subtraction

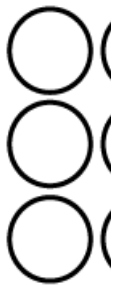
Cross off the counters to solve each.



$18 - 9 = \underline{\quad}$



$14 - 8 = \underline{\quad}$





## ~ PREVIEW ~

Please log in or register to download the printable version of this worksheet.



$15 - 7 = \underline{\quad}$

$12 - 8 = \underline{\quad}$

Draw counters to solve.

Draw counters to solve.

$10 - 5 = \underline{\quad}$

$13 - 6 = \underline{\quad}$