




Name: _____

Subtraction


$$\begin{array}{r} \$14.17 \\ -\$ 3.45 \\ \hline \end{array}$$


$$\begin{array}{r} \$37.94 \\ -\$12.89 \\ \hline \end{array}$$

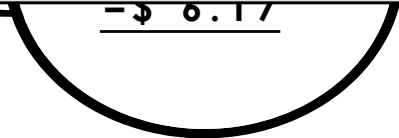

$$\begin{array}{r} \$8.47 \\ -\$6.55 \\ \hline \end{array}$$





Preview


Please log in to download
the printable version of this worksheet.



$$\begin{array}{r} -\$21.59 \\ \hline \end{array}$$


$$\begin{array}{r} -\$ 6.17 \\ \hline \end{array}$$


$$\begin{array}{r} -\$16.75 \\ \hline \end{array}$$


$$\begin{array}{r} \$52.66 \\ -\$10.27 \\ \hline \end{array}$$


$$\begin{array}{r} \$92.05 \\ -\$61.34 \\ \hline \end{array}$$


$$\begin{array}{r} \$17.28 \\ -\$ 5.32 \\ \hline \end{array}$$

ANSWER KEY

Subtraction




Three snowman illustrations, each with a subtraction problem on its chest. The snowmen are drawn in a simple, cartoonish style with black outlines, wearing black hats and white bows. They are surrounded by small circles representing snowflakes.

$\begin{array}{r} \$14.17 \\ - \$ 3.45 \\ \hline \$10.72 \end{array}$	$\begin{array}{r} \$37.94 \\ - \$12.89 \\ \hline \$25.05 \end{array}$	$\begin{array}{r} \$ 8.47 \\ - \$6.55 \\ \hline \$ 1.92 \end{array}$
---	---	--



A horizontal banner with a blue background. On the left, a superhero character with brown hair, wearing a blue suit and a red cape, is flying. A blue shield with the letters 'MJS' is on his chest. To the right of the character, the word "Preview" is written in a large, bold, red font. Below it, the text "Please log in to download the printable version of this worksheet." is written in a smaller, black font.



Three snowman illustrations, each with a subtraction problem on its chest. The snowmen are drawn in a simple, cartoonish style with black outlines, wearing black hats and white bows. They are surrounded by small circles representing snowflakes.

$\begin{array}{r} -\$21.59 \\ \hline \$22.29 \end{array}$	$\begin{array}{r} -\$ 6.17 \\ \hline \$18.22 \end{array}$	$\begin{array}{r} -\$16.75 \\ \hline \$59.10 \end{array}$
$\begin{array}{r} \$52.66 \\ - \$10.27 \\ \hline \$42.39 \end{array}$	$\begin{array}{r} \$92.05 \\ - \$61.34 \\ \hline \$30.71 \end{array}$	$\begin{array}{r} \$17.28 \\ - \$ 5.32 \\ \hline \$11.96 \end{array}$