

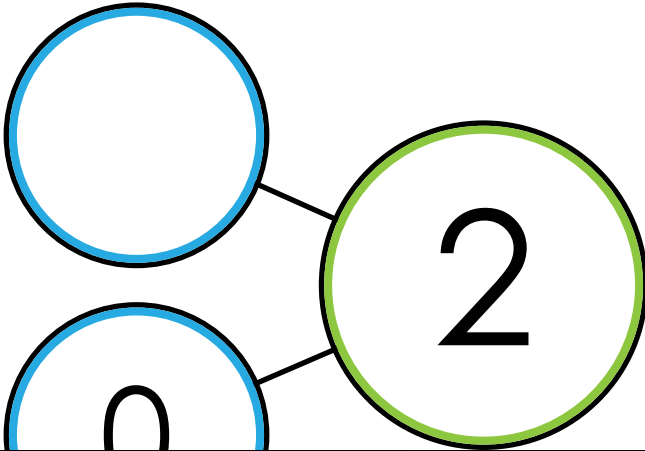
Name: _____

Number Bonds




Use addition and subtraction to fill in the missing number of each number bond.

a.

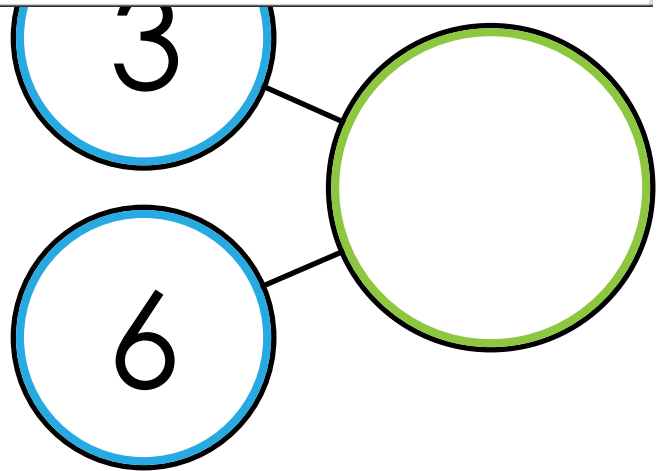
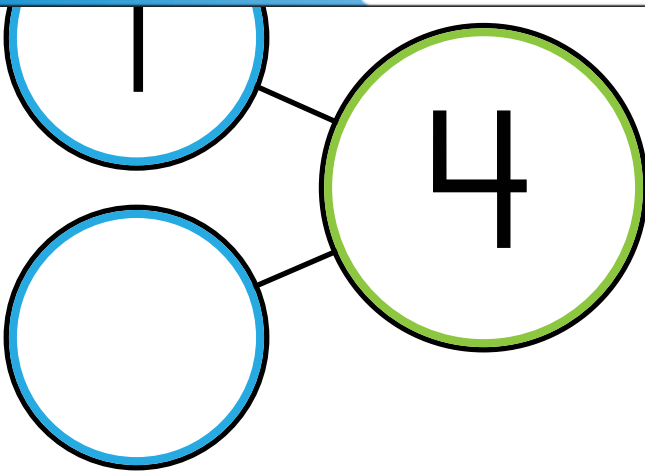


b.



Preview
Please log in to download the printable version of this worksheet.

c.



$$\underline{\quad} + \underline{\quad} = \underline{\quad}$$

$$\underline{\quad} + \underline{\quad} = \underline{\quad}$$

ANSWER KEY

Number Bonds

Use addition and subtraction to fill in the missing number of each number bond.



a.



b.



Preview

Please log in to download the printable version of this worksheet.



$$\underline{1} + \underline{3} = \underline{4} \quad \underline{3} + \underline{6} = \underline{9}$$