


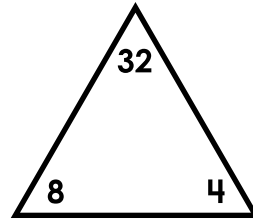
# 1. Multiply by 4s

What multiplication fact is shown by the array?



# 2. Multiply by 4s

Write two multiplication facts using the numbers in the triangle.



$$\underline{\quad} \times \underline{\quad} = \underline{\quad}$$



# Preview


Please log in to download the printable version of this worksheet.

Rewrite the addition expression as a multiplication fact.

$$3 + 3 + 3 + 3$$

$$\underline{\quad} \times \underline{\quad} = \underline{\quad}$$

What multiplication fact is shown by the groups?



$$\underline{\quad} \times \underline{\quad} = \underline{\quad}$$

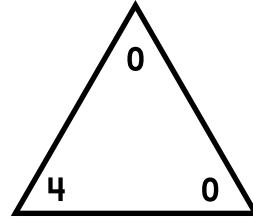
## 5. Multiply by 4s

What multiplication fact is shown by the array?



## 6. Multiply by 4s

Write two multiplication facts using the numbers in the triangle.



$$\underline{\quad} \times \underline{\quad} = \underline{\quad}$$



# Preview


Please log in to download the printable version of this worksheet.

Rewrite the addition expression as a multiplication fact.

$$4 + 4 + 4 + 4$$

$$\underline{\quad} \times \underline{\quad} = \underline{\quad}$$

What multiplication fact is shown by the groups?



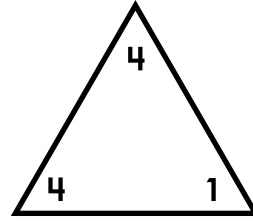
$$\underline{\quad} \times \underline{\quad} = \underline{\quad}$$

## 9. Multiply by 4s


What multiplication fact is shown by the array?


## 10. Multiply by 4s

Write two multiplication facts using the numbers in the triangle.



$$\underline{\quad} \times \underline{\quad} = \underline{\quad}$$



# Preview


Please log in to download the printable version of this worksheet.

Rewrite the addition expression as a multiplication fact.

$$10 + 10 + 10 + 10$$

$$\underline{\quad} \times \underline{\quad} = \underline{\quad}$$


What multiplication fact is shown by the groups?



$$\underline{\quad} \times \underline{\quad} = \underline{\quad}$$

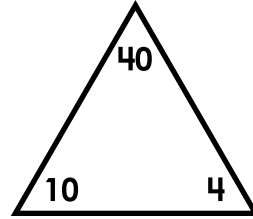
### 13. Multiply by 4s

What multiplication fact is shown by the array?



### 14. Multiply by 4s

Write two multiplication facts using the numbers in the triangle.



\_\_\_\_\_ × \_\_\_\_\_ = \_\_\_\_\_



## Preview


Please log in to download the printable version of this worksheet.

Rewrite the addition expression as a multiplication fact.

$$6 + 6 + 6 + 6$$

\_\_\_\_\_ × \_\_\_\_\_ = \_\_\_\_\_


What multiplication fact is shown by the groups?



\_\_\_\_\_ × \_\_\_\_\_ = \_\_\_\_\_

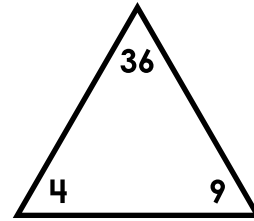
## 17. Multiply by 4s

What multiplication fact is shown by the array?



## 18. Multiply by 4s

Write two multiplication facts using the numbers in the triangle.



$$\underline{\quad} \times \underline{\quad} = \underline{\quad}$$



# Preview


Please log in to download the printable version of this worksheet.

Rewrite the addition expression as a multiplication fact.

$$7 + 7 + 7 + 7$$

$$\underline{\quad} \times \underline{\quad} = \underline{\quad}$$


What multiplication fact is shown by the groups?



$$\underline{\quad} \times \underline{\quad} = \underline{\quad}$$

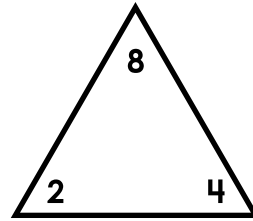
## 21. Multiply by 4s

What multiplication fact is shown by the array?



## 22. Multiply by 4s

Write two multiplication facts using the numbers in the triangle.



$$\underline{\quad} \times \underline{\quad} = \underline{\quad}$$



# Preview


Please log in to download the printable version of this worksheet.

Rewrite the addition expression as a multiplication fact.

$$9 + 9 + 9 + 9$$

$$\underline{\quad} \times \underline{\quad} = \underline{\quad}$$

What multiplication fact is shown by the groups?



$$\underline{\quad} \times \underline{\quad} = \underline{\quad}$$

Name: \_\_\_\_\_

## Task Cards: Multiply by 4s

1. \_\_\_\_\_

13. \_\_\_\_\_

2a. \_\_\_\_\_

14a. \_\_\_\_\_

2b. \_\_\_\_\_

14b. \_\_\_\_\_

3. \_\_\_\_\_

15. \_\_\_\_\_

4. \_\_\_\_\_

16. \_\_\_\_\_



# Preview

Please log in to download  
the printable version of this worksheet.

7. \_\_\_\_\_

19. \_\_\_\_\_

8. \_\_\_\_\_

20. \_\_\_\_\_

9. \_\_\_\_\_

21. \_\_\_\_\_

10a. \_\_\_\_\_

22a. \_\_\_\_\_

10b. \_\_\_\_\_

22b. \_\_\_\_\_

11. \_\_\_\_\_

23. \_\_\_\_\_

12. \_\_\_\_\_

24. \_\_\_\_\_

# ANSWER KEY

## Task Cards: Multiply by 4s

1.  $4 \times 5 = 20$

13.  $4 \times 3 = 12$

2a.  $4 \times 8 = 32$

14a.  $4 \times 10 = 40$

# Preview

Please log in to download  
the printable version of this worksheet.



11.  $4 \times 10 = 40$

23.  $4 \times 9 = 36$

12.  $4 \times 6 = 24$

24.  $4 \times 3 = 12$