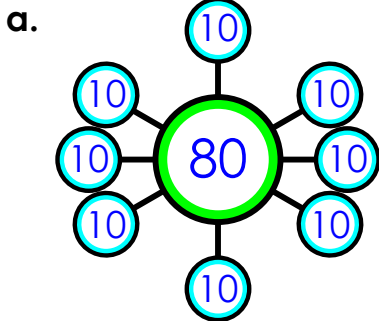


Name: _____

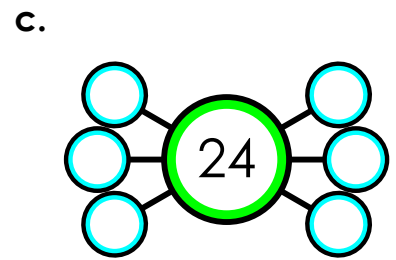
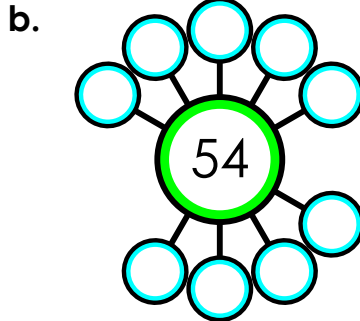
Number Bonds

Multiplication & Division

Use multiplication and division to fill in the missing number or numbers of each number bond. Write the fact in the space provided.

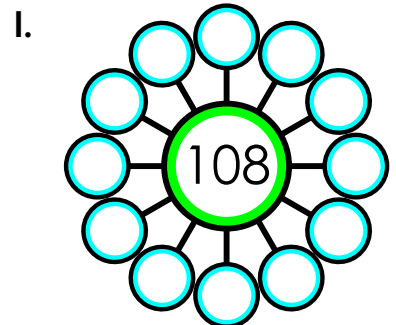
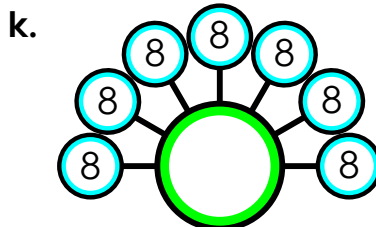
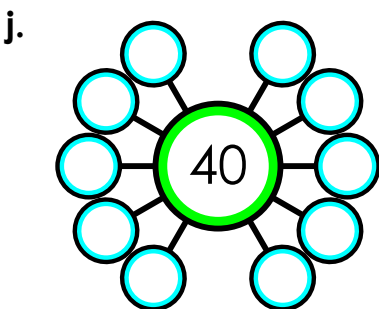
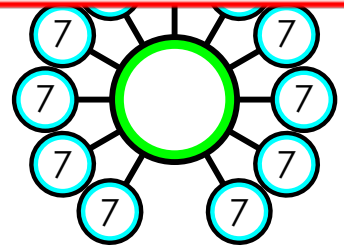
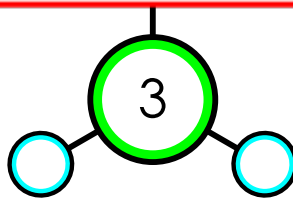
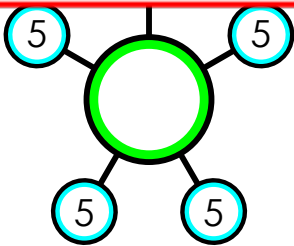


$8 \times 10 = 80$



~ PREVIEW ~

Please log in or register to download the printable version of this worksheet.



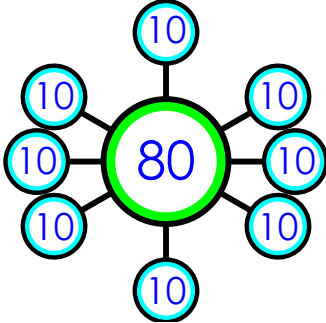
ANSWER KEY

Number Bonds

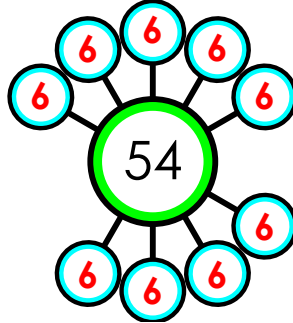
Multiplication & Division

Use multiplication and division to fill in the missing number or numbers of each number bond. Write the fact in the space provided.

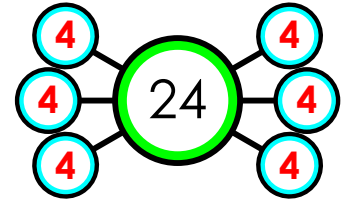
a.



b.



c.



~ PREVIEW ~

Please log in or register to download
the printable version of this worksheet.

 $10 \times 4 = 40$

 $7 \times 8 = 56$

 $12 \times 9 = 108$