


Name: \_\_\_\_\_

## Median, Mode, and Range


Find the median, mode, and range for each set of numbers.



median - \_\_\_\_\_

mode - \_\_\_\_\_


range - \_\_\_\_\_



median - \_\_\_\_\_

mode - \_\_\_\_\_

range - \_\_\_\_\_



median - \_\_\_\_\_


mode - \_\_\_\_\_

range - \_\_\_\_\_

## ANSWER KEY

### Median, Mode, and Range


Find the median, mode, and range for each set of numbers.



median - 12

mode - 5

range - 20



median - 1

mode - 1

range - 6



median - 15

mode - 15

range - 15