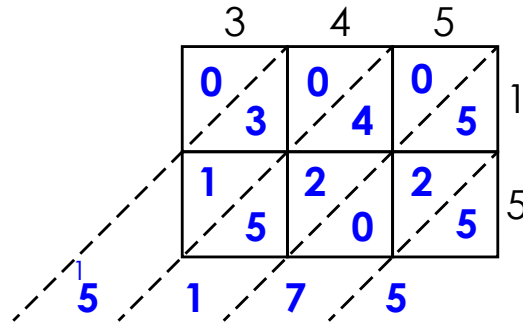


Name: _____

Lattice Multiplication

Find 345×15



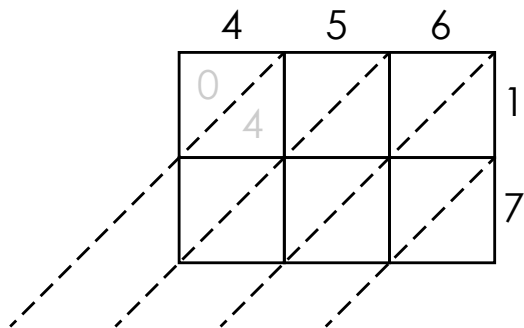
Answer: $345 \times 15 = 5,175$



~ PREVIEW ~

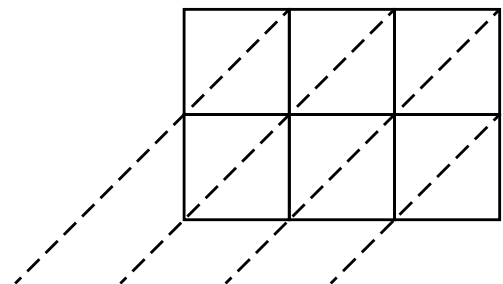
Please log in or register to download the printable version of this worksheet.

a. Find 456×17 .



Answer: _____

b. Find 567×23 .

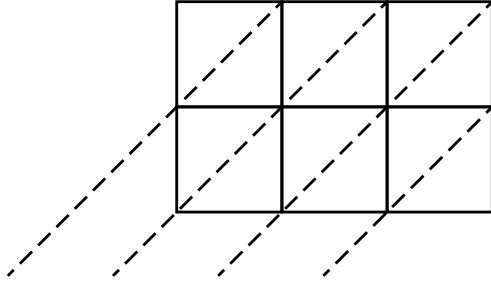


Answer: _____

Name: _____

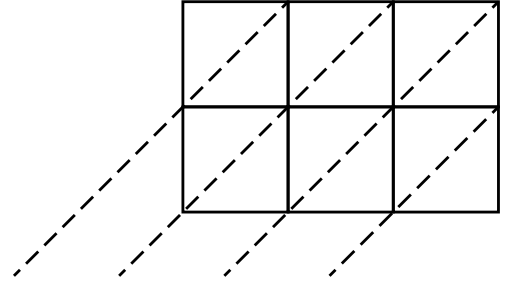
Lattice Multiplication

c. Find 211×16 .



Answer: _____

d. Find 355×18 .



Answer: _____



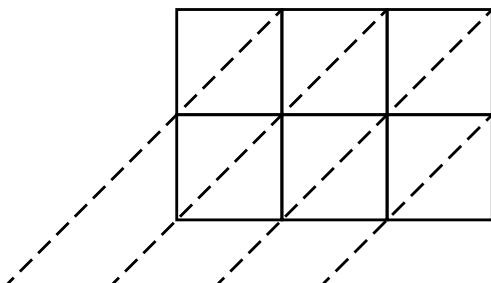
~ PREVIEW ~

Please log in or register to download the printable version of this worksheet.

Answer: _____

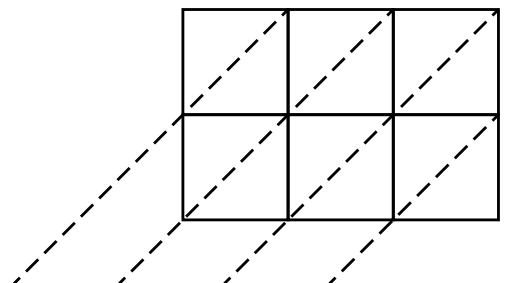
Answer: _____

g. Find 132×33 .



Answer: _____

h. Find 841×46 .



Answer: _____

Lattice Multiplication

Find 345×15

	3	4	5	
1	0 3	0 4	0 5	1
5	1 5	2 0	2 5	5

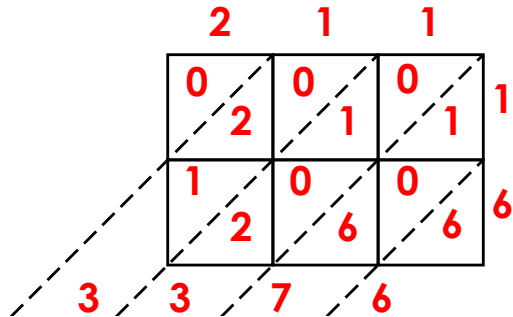


~ PREVIEW ~

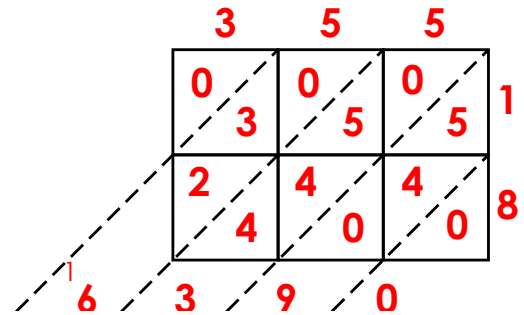
Please log in or register to download the printable version of this worksheet.

Lattice Multiplication

c. Find 211×16 .



d. Find 355×18 .



~ PREVIEW ~

Please log in or register to download the printable version of this worksheet.

Answer: $132 \times 33 = 4,356$

Answer: $841 \times 46 = 38,686$