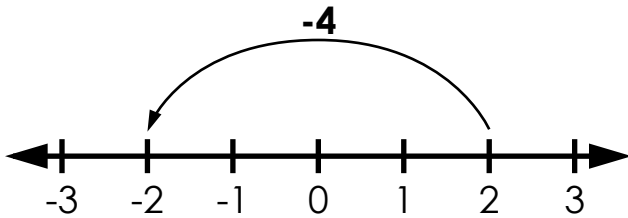


Name: \_\_\_\_\_

# Subtracting Integers

Move **left** on a number line to subtract a positive integer.

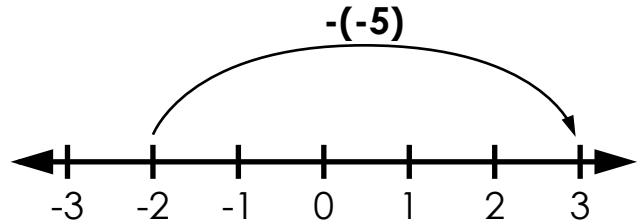
$$2 - 4 = \underline{\quad ? \quad}$$



$$2 - 4 = \underline{-2}$$

Move **right** on a number line to subtract a negative integer.

$$-2 - (-5) = \underline{\quad ? \quad}$$



$$-2 - (-5) = \underline{3}$$

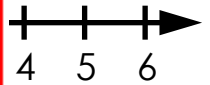
Use the num

a.  $4 - 7 =$  \_\_\_\_\_

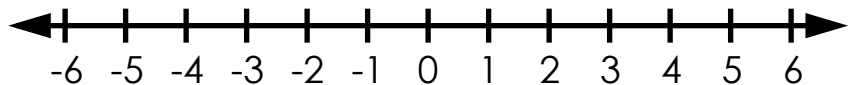


## PREVIEW

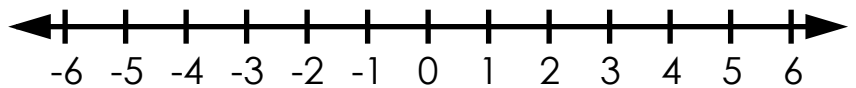
Please log in or register to download the printable version of this worksheet.



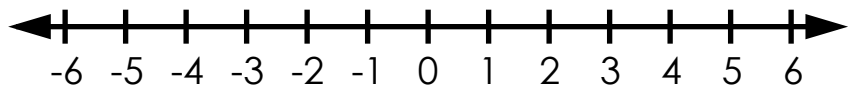
b.  $-1 - (-3) =$  \_\_\_\_\_



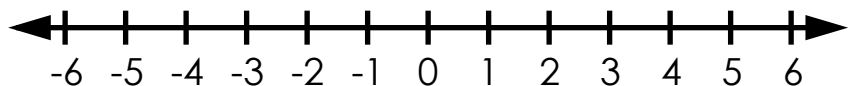
c.  $0 - 5 =$  \_\_\_\_\_



d.  $1 - 3 =$  \_\_\_\_\_



e.  $-4 - (-4) =$  \_\_\_\_\_

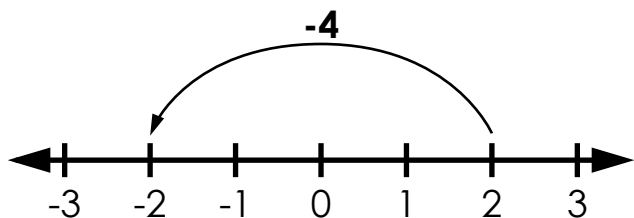


# ANSWER KEY

## Subtracting Integers

Move **left** on a number line to subtract a positive integer.

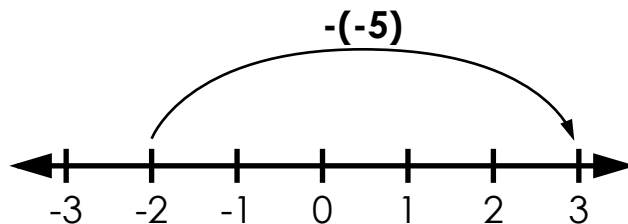
$$2 - 4 = \underline{\quad ? \quad}$$



$$2 - 4 = \underline{-2}$$

Move **right** on a number line to subtract a negative integer.

$$-2 - (-5) = \underline{\quad ? \quad}$$



$$-2 - (-5) = \underline{3}$$

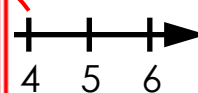
Use the num

a.  $4 - 7 =$

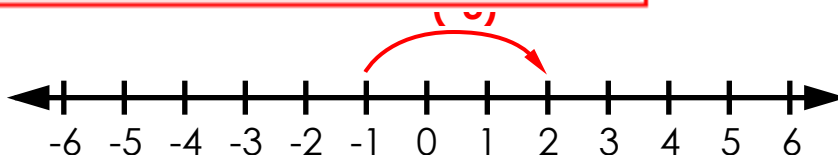


# PREVIEW

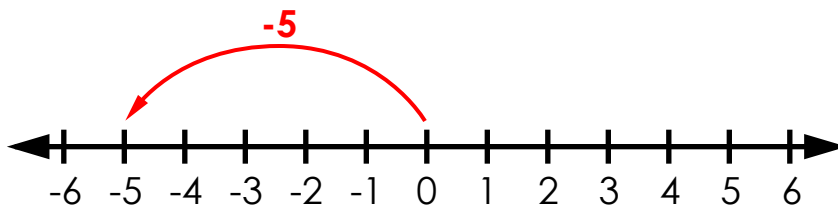
Please log in or register to download the printable version of this worksheet.



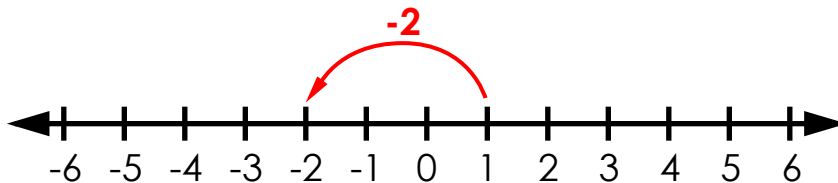
b.  $-1 - (-3) = \underline{\quad 2 \quad}$



c.  $0 - 5 = \underline{\quad -5 \quad}$



d.  $1 - 3 = \underline{\quad -2 \quad}$



e.  $-4 - (-4) = \underline{\quad 0 \quad}$

