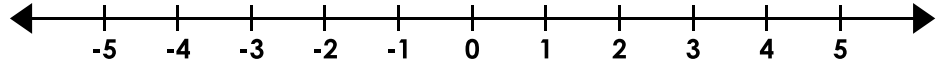


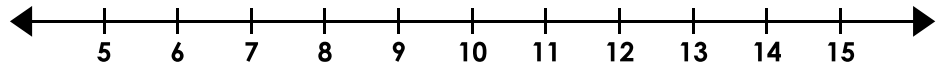
# Inequalities

Graph the inequalities.

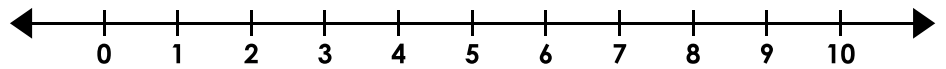
1.  $2w < -6$



2.  $\frac{i}{2.4} \leq 5$




3.  $\frac{3}{5} \geq \frac{3}{10}t$




## Preview

Please log in to download  
the printable version of this worksheet.

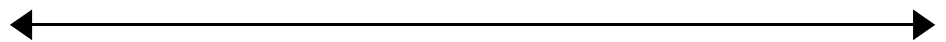
7.  $-108 \leq 4e$



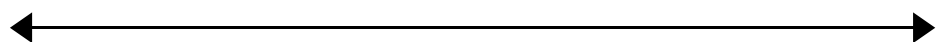
8.  $\frac{n}{0.7} > -2.4$



9.  $1\frac{1}{2}c < 6$



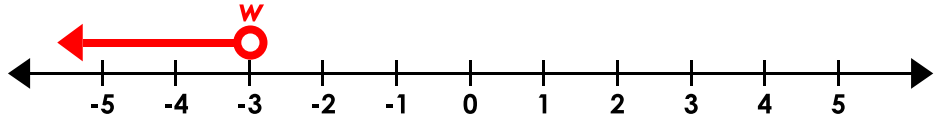
10.  $-620 \leq \frac{h}{1.3}$



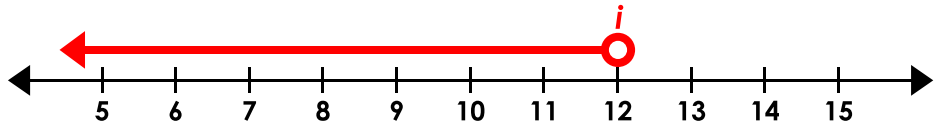
# Inequalities

Graph the inequalities.

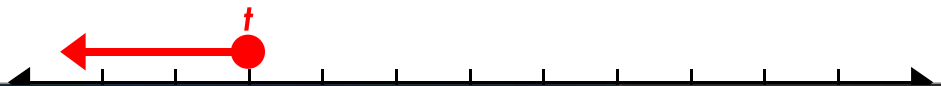
1.  $2w < -6$



2.  $\frac{i}{2.4} \leq 5$



3.  $\frac{3}{5} \geq \frac{3}{10}t$



# Preview

Please log in to download  
the printable version of this worksheet.



(NOTE: For #10, the scale is unimportant as long as it is on -800, the circle is filled, and the arrow points the correct direction.)