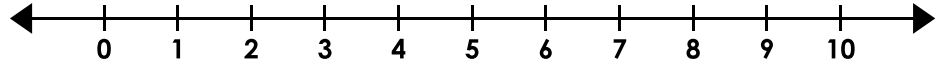


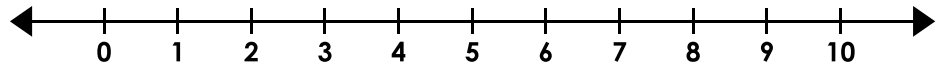
Inequalities

Graph the inequalities.

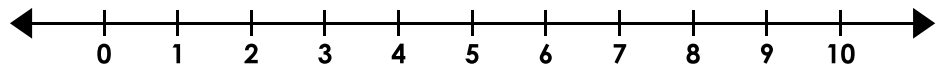
1. $3 + l > 7$



2. $a - 4 \leq 2$




3. $12 \geq s + 3$




Preview

Please log in to download
the printable version of this worksheet.

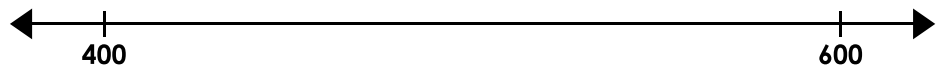
7. $117 < 32 + d$




8. $i - 300 \geq 250$



9. $y + 326 \leq 781$



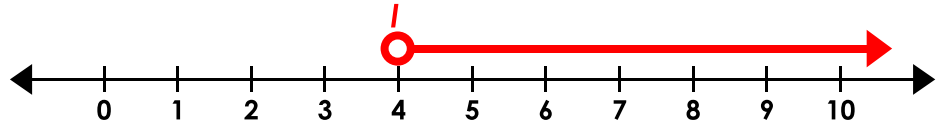
10. $957 < o - 73$



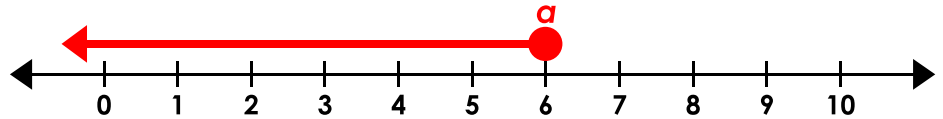
Inequalities

Graph the inequalities.

1. $3 + l > 7$



2. $a - 4 \leq 2$



3. $12 > s + 2$



Preview

Please log in to download
the printable version of this worksheet.



(NOTE: For #10, the scale is unimportant as long as it is on 1,030, the circle is not filled, and the arrow points the correct direction.)