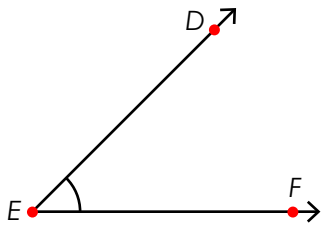


Name: _____

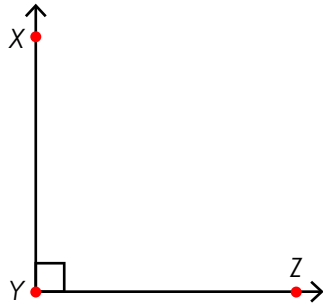
Angles

Identify each type of angle shown and estimate the angle's measurement.
Circle the correct choice for each.



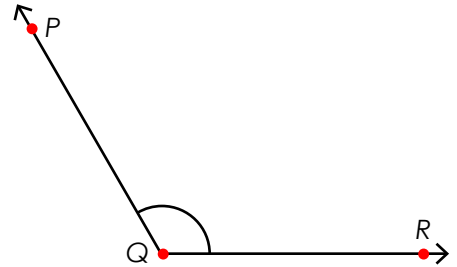
acute obtuse right
90° 45° 120°

angle name = _____



acute obtuse right
90° 80° 100°

angle name = _____



acute obtuse right
90° 45° 120°

angle name = _____



Preview

Please log in to download the printable version of this worksheet.

80° 95° 160°

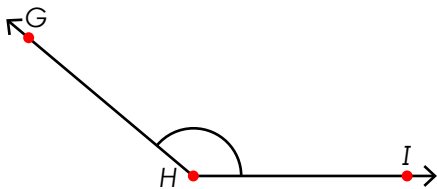
angle name = _____

90° 35° 145°

angle name = _____

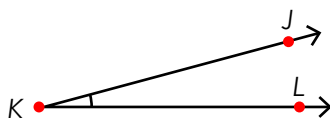
85° 90° 95°

angle name = _____



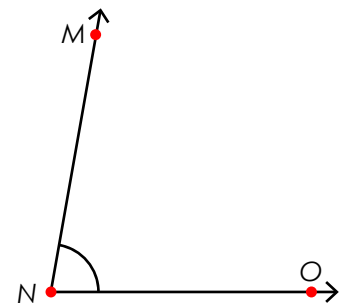
acute obtuse right
100° 140° 180°

angle name = _____



acute obtuse right
45° 95° 15°

angle name = _____



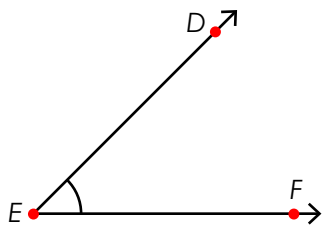
acute obtuse right
50° 90° 70°

angle name = _____

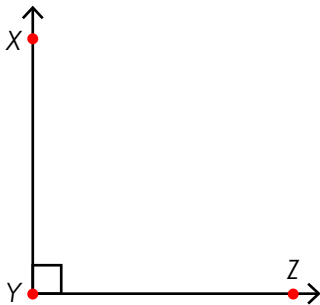
ANSWER KEY

Angles

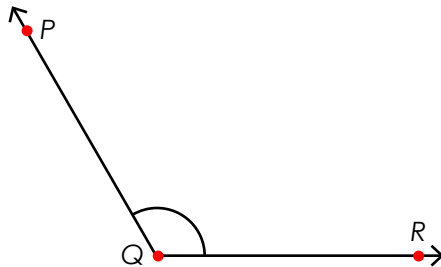
Identify each type of angle shown and estimate the angle's measurement.
Circle the correct choice for each.



acute obtuse right




acute obtuse right



acute obtuse right

Preview

Please log in to download
the printable version of this worksheet.



acute obtuse right

100° 140° 180°


angle name = $\angle GHI$



acute obtuse right

45° 95° 15°

angle name = $\angle JKL$



acute obtuse right

50° 90° 70°

angle name = $\angle MNO$