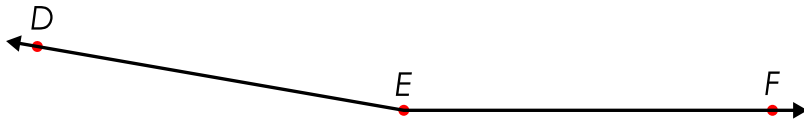


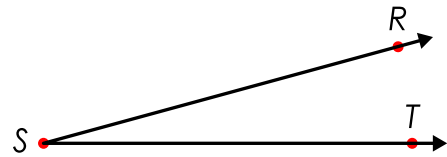
Name: _____

Measuring Angles

Using a protractor, measure the angles.



$\angle DEF =$ _____




$\angle RST =$ _____



$\angle LMN =$ _____

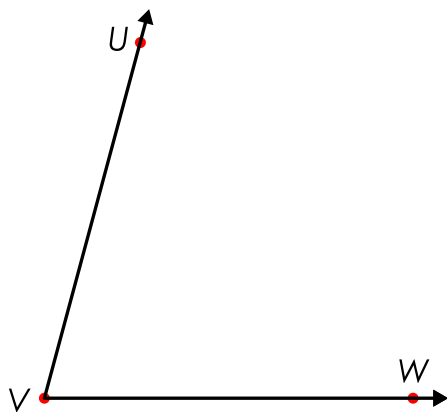


$\angle ABC =$ _____

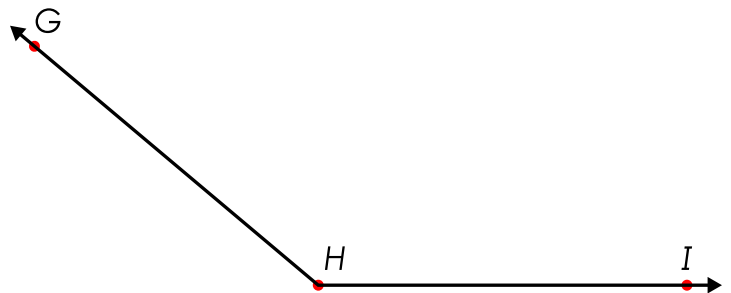


Preview

Please log in to download the printable version of this worksheet.



$\angle UVW =$ _____

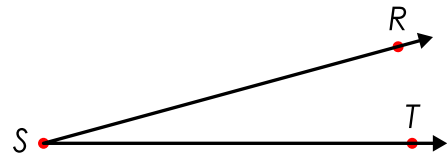
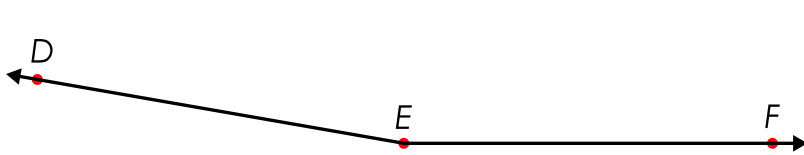


$\angle GHI =$ _____

ANSWER KEY



Measuring Angles

Using a protractor, measure the angles.



$$\angle DEF = 170^\circ$$

$$\angle RST = 15^\circ$$



$$\angle UVW = 75^\circ$$

$$\angle GHI = 140^\circ$$