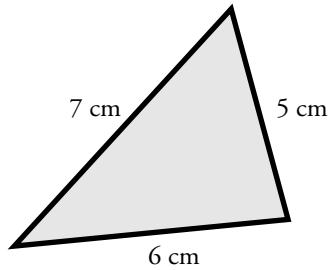


Name: _____

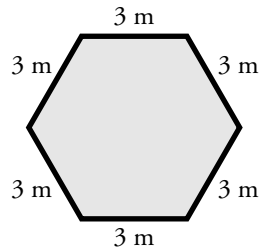
Perimeter of a Polygon

Find the perimeter of each shape by adding the lengths of each side.

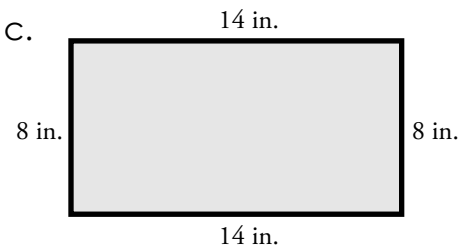
a.



b.



c.




25 km



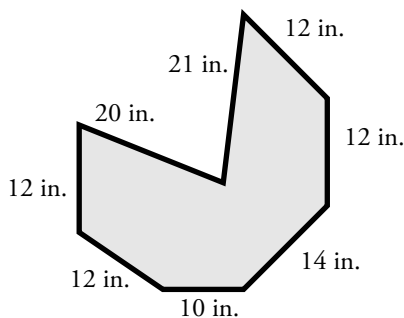
~ PREVIEW ~

Please log in or register to download the printable version of this worksheet.

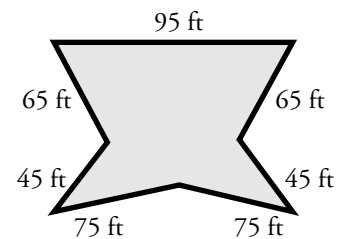
g.



h.



i.



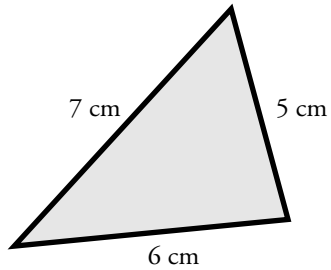
Challenge: Draw a square with a perimeter of 180 yards. Label the lengths of each side.

ANSWER KEY

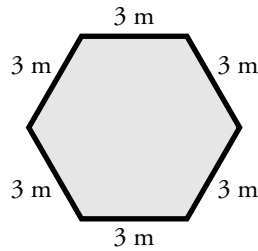
Perimeter of a Polygon

Find the perimeter of each shape by adding the lengths of each side.

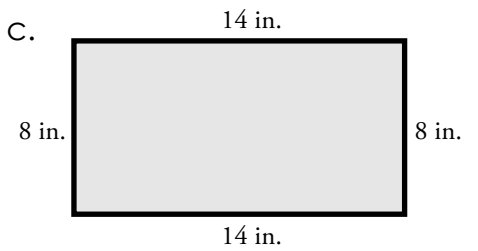
a.



b.



c.



~ PREVIEW ~

Please log in or register to download the printable version of this worksheet.

