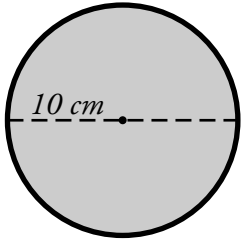
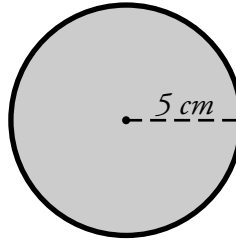


Name: _____

Circumference of a Circle



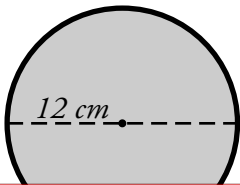
$$C = \pi \times d$$
$$d = 10 \text{ cm}$$
$$\pi \approx 3.14$$
$$3.14 \times 10 \text{ cm} = 31.4 \text{ cm}$$



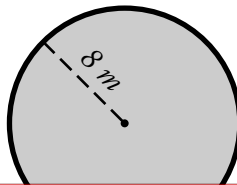
$$C = 2 \times \pi \times r$$
$$r = 5 \text{ cm}$$
$$\pi \approx 3.14$$
$$2 \times 3.14 \times 5 \text{ cm} = 31.4 \text{ cm}$$

Find the circumference of each circle. Use 3.14 for pi.

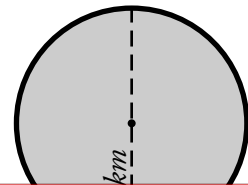
a.



b.

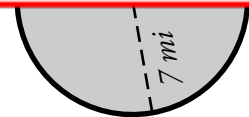
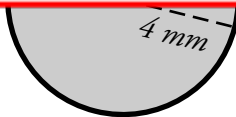


c.



~ PREVIEW ~

Please log in or register to download the printable version of this worksheet.



Find the missing measurement for each circle.

g. $r = 3 \text{ mm}$, $d = 6 \text{ mm}$, $C =$ _____

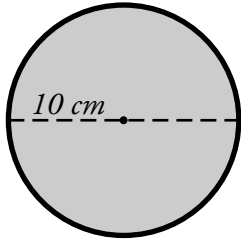
h. $r = 10 \text{ in.}$, $d =$ _____, $C = 62.80 \text{ in.}$

i. $r =$ _____, $d = 5 \text{ m}$, $C = 15.70 \text{ m}$

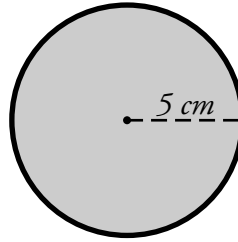
j. $r = 2 \text{ ft}$, $d =$ _____, $C =$ _____

ANSWER KEY

Circumference of a Circle



$$C = \pi \times d$$
$$d = 10 \text{ cm}$$
$$\pi \approx 3.14$$
$$3.14 \times 10 \text{ cm} = 31.4 \text{ cm}$$



$$C = 2 \times \pi \times r$$
$$r = 5 \text{ cm}$$
$$\pi \approx 3.14$$
$$2 \times 3.14 \times 5 \text{ cm} = 31.4 \text{ cm}$$

Find the circumference of each circle. Use 3.14 for pi.

a.



b.



c.



~ PREVIEW ~

Please log in or register to download
the printable version of this worksheet.