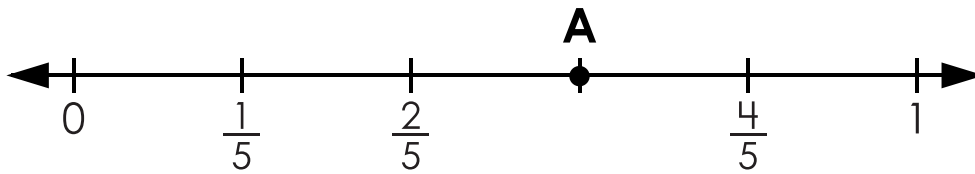


Name: _____

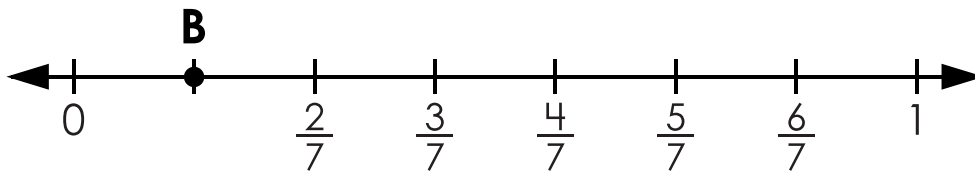
Fractions on Number Lines

1.



Point **A** is:

2.



Point **B** is:

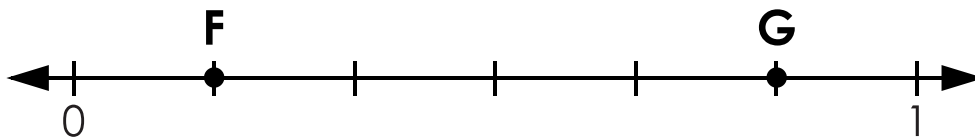


Preview
Please log in to download the printable version of this worksheet.

0

1

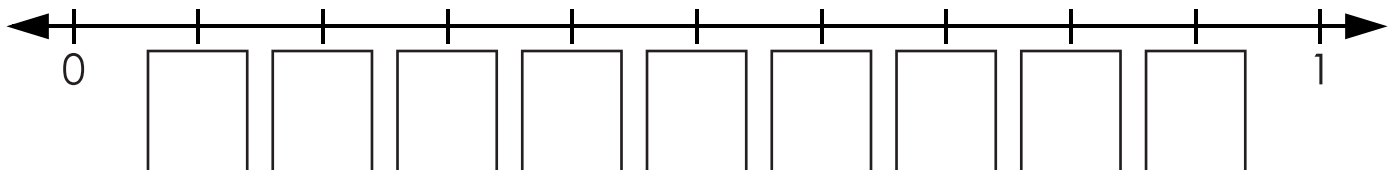
5.



Point **F** is:

Point **G** is:

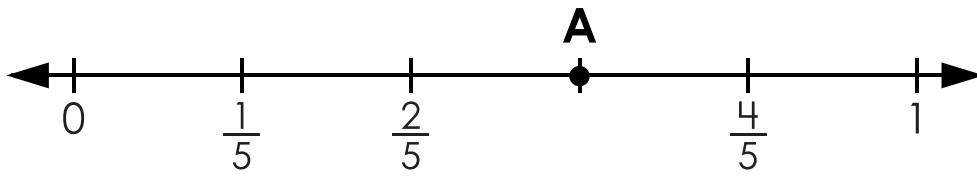
6. Label each fraction on the number line below.



ANSWER KEY

Fractions on Number Lines

1.



Point A is:

$\frac{3}{5}$

2.



Point B is:

$\frac{1}{10}$

3.

Preview

Please log in to download the printable version of this worksheet.

4.

E is:

5.

G is:

6. Label each fraction on the number line below.

