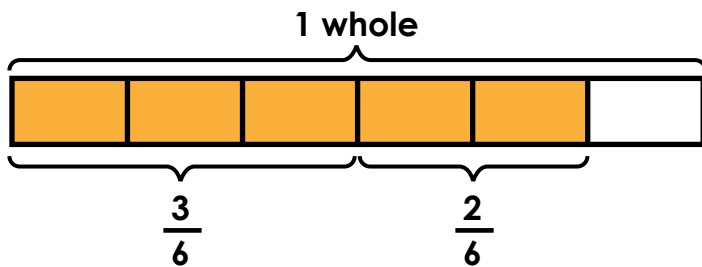


Name: _____

Adding Fractions



number sentence: $\frac{3}{6} + \frac{2}{6} = \frac{5}{6}$

Label each tape diagram. Then write the number sentence shown by each diagram.

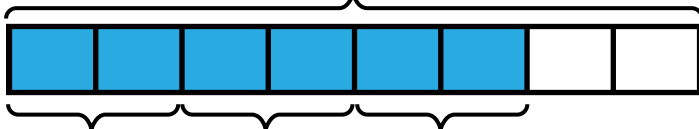
a. 1 whole



Preview

Please log in to download
the printable version of this worksheet.

c. 1 whole



number sentence: _____

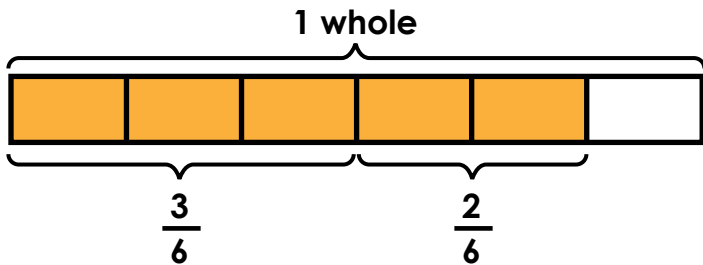
d. 1 whole



number sentence: _____

ANSWER KEY

Adding Fractions



number sentence: $\frac{3}{6} + \frac{2}{6} = \frac{5}{6}$

Label

a.



b.



c.



d.



number sentence: $\frac{2}{3} + \frac{1}{3} = \frac{3}{3}$ or 1

Preview

Please log in to download
the printable version of this worksheet.



or $\frac{3}{4}$