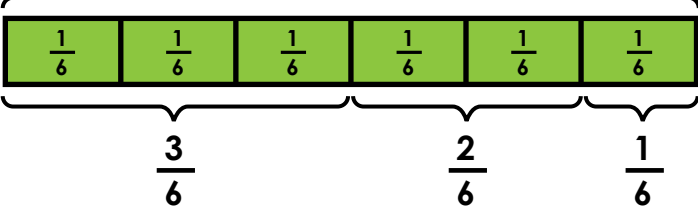


Name: _____

Adding Fractions With Sums of 1

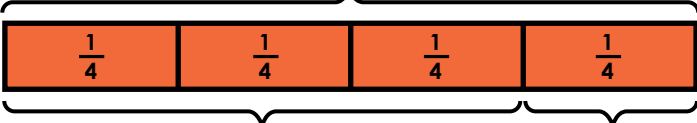
1 whole



number sentence: $\frac{3}{6} + \frac{2}{6} + \frac{1}{6} = 1$

Write the correct fractions for each tape diagram. Then write a number sentence for each.

a. 1 whole



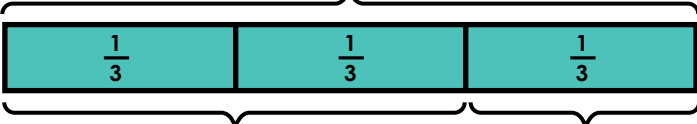
number sentence: _____



Preview

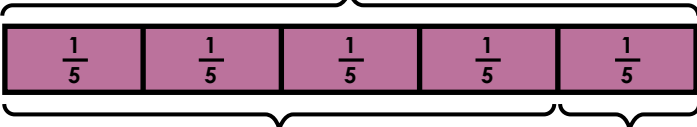
Please log in to download the printable version of this worksheet.

c. 1 whole



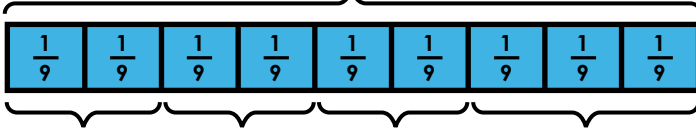
number sentence: _____

d. 1 whole



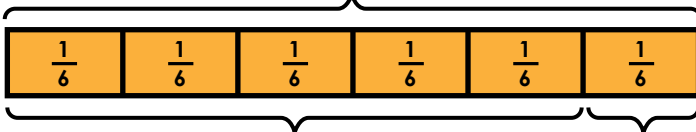
number sentence: _____

e. 1 whole



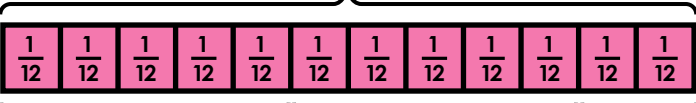
number sentence: _____

f. 1 whole



number sentence: _____

g. 1 whole



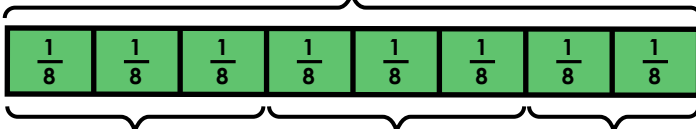
number sentence: _____



Preview

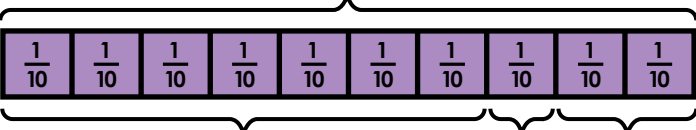
Please log in to download
the printable version of this worksheet.

i. 1 whole



number sentence: _____

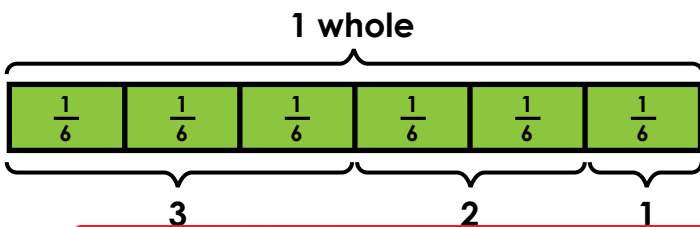
j. 1 whole



number sentence: _____

ANSWER KEY

Adding Fractions With Sums of 1



number sentence: $\frac{3}{6} + \frac{2}{6} + \frac{1}{6} = 1$

Write

a.



b.



c.

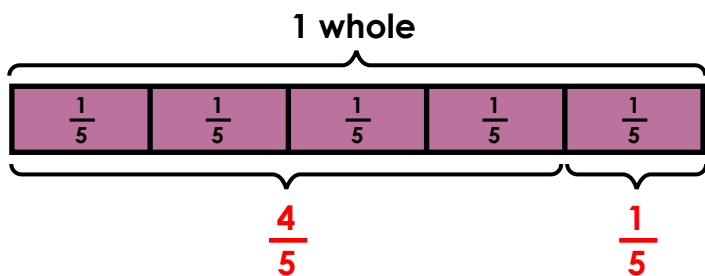


Preview

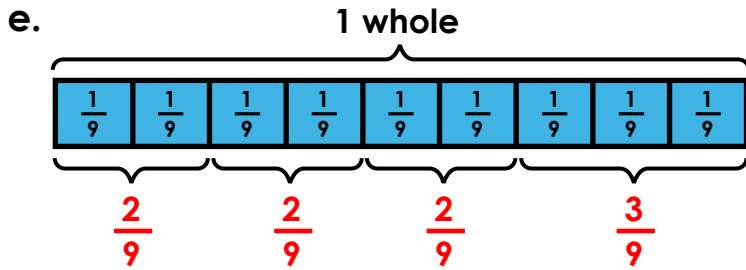
Please log in to download the printable version of this worksheet.



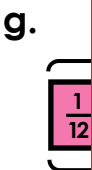
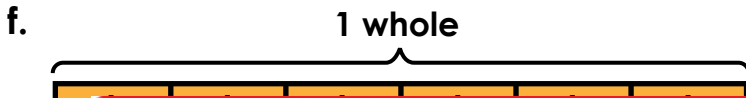
d.



number sentence: $\frac{4}{5} + \frac{1}{5} = 1$

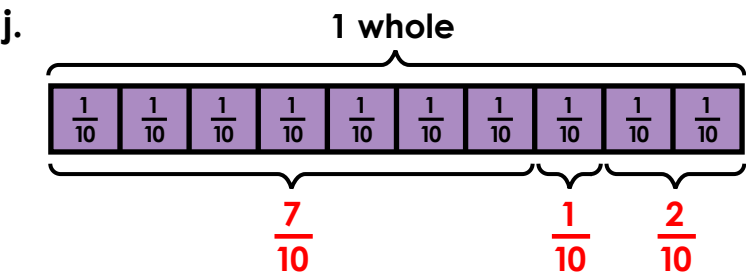


number sentence: $\frac{2}{9} + \frac{2}{9} + \frac{2}{9} + \frac{3}{9} = 1$



Preview

Please log in to download the printable version of this worksheet.



number sentence: $\frac{7}{10} + \frac{1}{10} + \frac{2}{10} = 1$