













Name: _____

Shape Division

 9	 505	 421	 3	 2	 9
 287	 5	 817	 116	 7	 312

Divide the numbers in the octagons. The larger number is the dividend.

Divide the numbers in the hexagons. The larger number is the dividend.

Divide the numbers in the triangles. The larger number is the dividend.



Preview




Please log in to download
the printable version of this worksheet.

Divide the numbers in the squares. The larger number is the dividend.

Divide the numbers in the circles. The larger number is the dividend.

Divide the numbers in the trapezoids. The larger number is the dividend.

Shape Division



Divide the numbers in the

Divide the numbers in the

Divide the numbers in the



Preview

Please log in to download
the printable version of this worksheet.

7

2

1

Divide the numbers in the squares. The larger number is the dividend.

$$\begin{array}{r} 41 \\ 7 \overline{) 287} \\ \underline{28} \\ 7 \\ \underline{7} \\ 0 \end{array}$$

Divide the numbers in the circles. The larger number is the dividend.

$$\begin{array}{r} 38 \frac{2}{3} \text{ or } 38r2 \\ 3 \overline{) 116} \\ \underline{9} \\ 26 \\ \underline{24} \\ 2 \end{array}$$

Divide the numbers in the trapezoids. The larger number is the dividend.

$$\begin{array}{r} 210 \frac{1}{2} \text{ or } 210r1 \\ 2 \overline{) 421} \\ \underline{4} \\ 2 \\ \underline{2} \\ 1 \\ \underline{0} \\ 1 \end{array}$$