


Name: _____

K-41

Skip Counting by 10s;
Place Value



Daily Word Problem

Each bundle has 10 sticks.



Preview

Please log in to download
the printable version of this worksheet.



How many
sticks are shown?

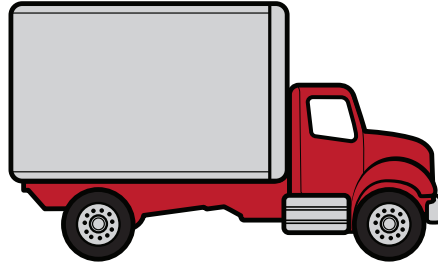
Name: _____

K-42


Addition to 5

Daily Word Problem

Dan saw 3



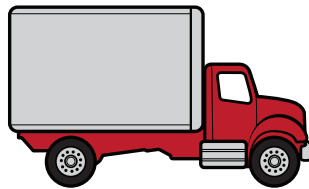
s.



Preview

Please log in to download
the printable version of this worksheet.

How many



s

did Dan see in all?


_____ + _____ = _____


Name: _____

K-43

Identifying
Basic Shapes

Daily Word Problem

Tate has 3  s .

Gray has 2  s .



Preview

Please log in to download
the printable version of this worksheet.

Who has the most  s ?


Who has the fewest  s ?

Name: _____

K-44

Addition to 10

Daily Word Problem



Preview

Please log in to download
the printable version of this worksheet.

How many s are there? _____

_____ + _____ = _____

Name: _____

K-45

Identifying
Basic Shapes

Daily Word Problem



Preview

Please log in to download
the printable version of this worksheet.

How many sides
does this shape have? _____

What shape is this? _____