

Name: _____

Daily Word Problem

Mrs. Adler ordered some new books for her classroom library. She used a frequency chart to keep track of the types of books.

Books	
Type	Frequency
Mystery	23
Graphic Novel	48
Nonfiction	31
Science Fiction	27

How many more graphic novels than science fiction books did she order?

How many books did she order altogether?

Show your work.


Name: _____

Daily Word Problem

Luca's construction company bought 16.7 pounds of brick and 9.8 pounds of concrete. How many pounds of material did the company buy in all?

Show your work.

answer: _____



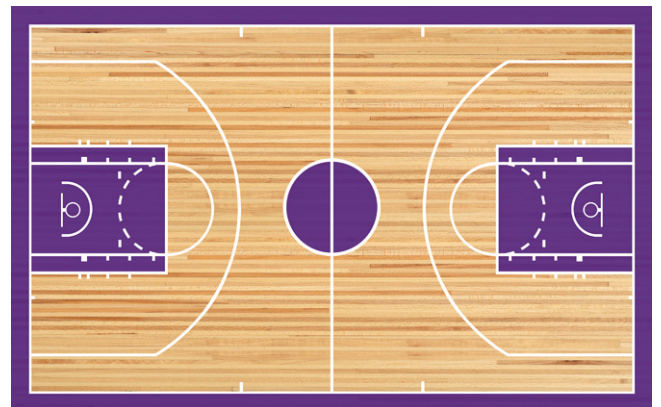
Name: _____

Daily Word Problem

A new basketball court is being put in at Jacob's school. It is 84 feet long and 50 feet wide. What is the perimeter of the basketball court?

Show your work.

answer: _____



Name: _____

Daily Word Problem

In the number 569.632, how does the value of the digit 6 to the left of the decimal point compare to the digit 6 to the right of the decimal point?

Explain your answer.



Name: _____

Daily Word Problem

Mia went to the farmer's market and bought a bag of apples and a bag of peaches. The apples weighed 3.46 pounds and the peaches weighed 2.31 pounds. How many more pounds of apples than peaches did she buy?

Show your work.

answer: _____



Daily Word Problem

Mrs. Adler ordered some new books for her classroom library. She used a frequency chart to keep track of the types of books.

Books	
Type	Frequency
Mystery	23
Graphic Novel	48
Nonfiction	31
Science Fiction	27

How many more graphic novels than science fiction books did she order?

21 graphic novels

How many books did she order altogether?

129 books

Show your work.

$$48 - 27 = 21$$

$$23 + 48 + 31 + 27 = 129$$



Luca's construction company bought 16.7 pounds of brick and 9.8 pounds of concrete. How many pounds of material did the company buy in all?

Show your work.

$$16.7 + 9.8 = 26.5$$

answer: 26.5 pounds



A new basketball court is being put in at Jacob's school. It is 84 feet long and 50 feet wide. What is the perimeter of the basketball court?

Show your work.

$$84 \times 2 = 168$$

$$50 \times 2 = 100$$

$$168 + 100 = 268$$

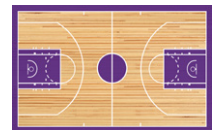
or

$$84 + 84 = 168$$

$$50 + 50 = 100$$

$$168 + 100 = 268$$

answer: 268 feet



In the number 569.632, how does the value of the digit 6 to the left of the decimal point compare to the digit 6 to the right of the decimal point?

Explain your answer.

The digit 6 to the left of the decimal point represents 6 tens, while the digit 6 to the right of the decimal point represents 6 tenths.



Mia went to the farmer's market and bought a bag of apples and a bag of peaches. The apples weighed 3.46 pounds and the peaches weighed 2.31 pounds. How many more pounds of apples than peaches did she buy?

Show your work.

$$3.46 - 2.31 = 1.15$$

answer: 1.15 pounds

