

Name: _____

B-41

Addition &
Subtraction

**Multi-
Step**

Daily Word Problem

Roman drew 15 smile faces.

Marie drew 4 more smile faces than Roman.

How many smile faces did they draw altogether?


Show your work.



Preview

Please log in to download
the printable version of this worksheet.

answer: _____



Name: _____

B-42

Making an
Array

**Single-
Step**

Daily Word Problem

There are 9 pictures on the wall.
There are 3 pictures in each row.
How many rows of pictures are there?


Show your work.



Preview

Please log in to download
the printable version of this worksheet.

answer: _____



Name: _____

B-43

Addition &
Subtraction

**Multi-
Step**

Daily Word Problem

There are 13 children in Mrs. Fen's class.
Today, 2 boys and 3 girls are absent.
How many students are in class?


Show your work.



Preview

Please log in to download
the printable version of this worksheet.

answer: _____



Name: _____

B-44

Addition &
Subtraction

**Single-
Step**

Daily Word Problem

Chris and Zoe played a math game.
Chris scored 17 points.
Zoe scored 12 fewer points than Chris.
How many points did Zoe have?

Show your work.



Preview

Please log in to download
the printable version of this worksheet.

answer: _____



Name: _____

B-45

Addition &
Subtraction

**Multi-
Step**

Daily Word Problem

There were 18 fish in the creek.

10 were bass.

3 were perch.

The rest were carp.


How many fish were carp?



Preview

Please log in to download
the printable version of this worksheet.

answer: _____



Daily Word Problem

Preview

Please log in to download
the printable version of this worksheet.

