

Name: _____



Math Buzz

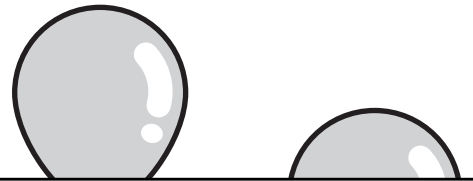
Count by ones.

38, _____, _____, _____, _____, _____, _____

Fill in the number bonds.



Number the balloons from tallest to shortest.

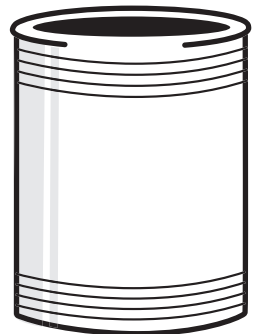

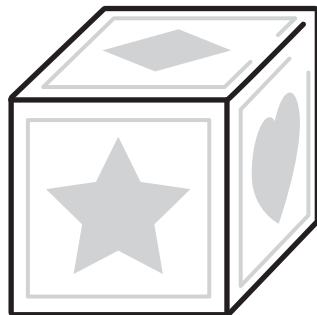


Preview

Please log in to download the printable version of this worksheet.



Color the .




Name: _____



Math Buzz

Pet Store



Write how many tens and ones make this number.

15	
tens	ones

Color the shapes with **straight sides**.



Preview


Please log in to download the printable version of this worksheet.



How many  ? _____

How many  ? _____

Which has **more**?



Circle the correct number sentence and solve.

Leo had 9 toy cars.

He got 1 more.

How many does he have total?

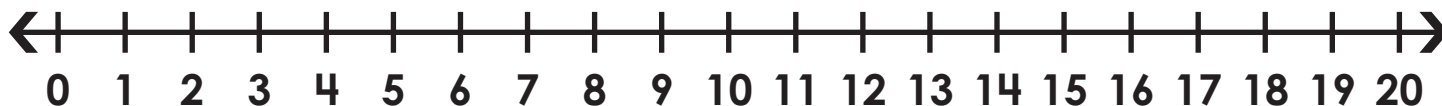
$$9 + 1 = \underline{\quad\quad\quad} \quad 9 - 1 = \underline{\quad\quad\quad}$$

Name: _____



Math Buzz

Use the number line to find the **sums**.




$8 + 5 = \underline{\quad}$

$13 + 2 = \underline{\quad}$

$7 + 11 = \underline{\quad}$

Number the cups from **shortest to tallest**.



Trace the shapes. Write how many of each shape.


— — — —

Preview


Please log in to download the printable version of this worksheet.

Fill in the missing numbers.

1 more	
17	
55	
98	




Name: _____







Math Buzz

Color the clouds that show numbers less than 50.






How many total  ?

Bug Collection		Total
		
		3



Preview

Please log in to download the printable version of this worksheet.



Circle the correct number sentence and solve.

Ava had 10 stickers. She gave 5 away.
How many stickers does Ava have?

$$10 + 5 = \underline{\quad}$$

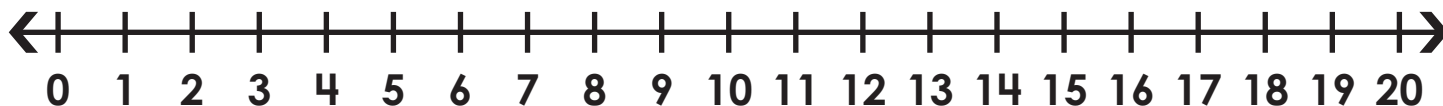
$$10 - 5 = \underline{\quad}$$

Name: _____



Math Buzz


Use the number line to find the **differences**.



$20 - 6 = \underline{\quad\quad}$

$8 - 4 = \underline{\quad\quad}$

$15 - 11 = \underline{\quad\quad}$


Color the .

Circle which weighs **more**.



Preview

Please log in to download
the printable version of this worksheet.



Count by tens.

10, _____, _____, _____, _____, 50, _____,

_____, _____, _____, _____, 100



Count by ones.

38, 39, 40, 41,
42, 43

Fill in the number bonds.

Number the balloons from **tallest** to **shortest**.

Color the .

Pet Store

How many ? 4

How many ? 7

Which has **more**?

Write how many tens and ones make this number.


15	
tens	ones
<u>1</u>	<u>5</u>

Color the shapes with **straight sides**.

Circle the correct number sentence and solve.

Leo had 9 toy cars. He got 1 more. How many does he have total?

9 + 1 = 10 9 - 1 = _____



Preview

Please log in to download the printable version of this worksheet.

Color the clouds that show numbers **less than 50**.

How many total ?

Bug Collection	Total
	<u>5</u>
	<u>3</u>

Color the shapes with **curved sides**.

Circle the correct number sentence and solve.

Ava had 10 stickers. She gave 5 away. How many stickers does Ava have?

10 + 5 = _____

10 - 5 = 5

Use the number line to find the **differences**.

20 - 6 = 14

8 - 4 = 4

15 - 11 = 4

Color the .

Circle which weighs **more**.

Count by tens.

10, 20, 30, 40,
50, 60, 70, 80,
90, 100