

Name: \_\_\_\_\_



# Math Buzz

Count by ones.

21					26				30
----	--	--	--	--	----	--	--	--	----

Add.

$$0 + 1 = \square$$

Write how many tens and ones.

--	--




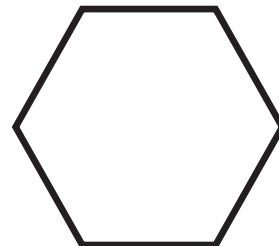

## Preview

Please log in to download  
the printable version of this worksheet.

$$0 + 3 = \square$$


--	--

$$0 + 4 = \square$$

Draw a line under the **hexagon**.

$$0 + 5 = \square$$

Name: \_\_\_\_\_



# Math Buzz

Count by ones.

31			34					39	
----	--	--	----	--	--	--	--	----	--

Subtract.

$$5 - 0 = \square$$

Write how many tens and ones.

	
--	--



# Preview

Please log in to download the printable version of this worksheet.

--	--

$$3 - 0 = \square$$

$$2 - 0 = \square$$

$$1 - 0 = \square$$

Circle the number that is **greater**.

9

4

Name: \_\_\_\_\_



# Math Buzz

Count by ones.

41		43				47			
----	--	----	--	--	--	----	--	--	--

Add.

$1 + 0 =$

Write how many tens and ones.

	
--	--



## Preview

Please log in to download  
the printable version of this worksheet.

$1 + 2 =$

$1 + 3 =$

$1 + 4 =$

Cam had 5 bananas.


He gave 3 to Eli.

How many does Cam have left?



\_\_\_\_\_ bananas

Name: \_\_\_\_\_



# Math Buzz

Count by ones.

51							58		60
----	--	--	--	--	--	--	----	--	----

Subtract.

$$5 - 1 = \square$$

Write how many tens and ones.



# Preview

Please log in to download  
the printable version of this worksheet.

--	--

$$3 - 1 = \square$$

$$2 - 1 = \square$$

$$1 - 1 = \square$$

Circle the number that is **less**.

8

3

Name: \_\_\_\_\_



# Math Buzz

Count by ones.

61				65					70
----	--	--	--	----	--	--	--	--	----

Add.

$$2 + 0 = \square$$

Write how many tens and ones.

--	--



# Preview

Please log in to download  
the printable version of this worksheet.

$$2 + 3 = \square$$

--	--

Pizza						
Burgers						

How many ? \_\_\_\_\_

How many ? \_\_\_\_\_



<p>Count by ones.</p> <p>21 22 23 24 25 26 27 28 29 30</p>	<p>Add.</p> <p><math>0 + 1 = 1</math></p> <p><math>0 + 2 = 2</math></p> <p><math>0 + 3 = 3</math></p> <p><math>0 + 4 = 4</math></p> <p><math>0 + 5 = 5</math></p>	<p>Write how many tens and ones.</p> <table border="1"> <tr> <td></td> <td></td> </tr> <tr> <td>Tens</td> <td>Ones</td> </tr> <tr> <td>1</td> <td>1</td> </tr> </table>			Tens	Ones	1	1	<p>Draw a line under the hexagon.</p> <p></p>
Tens	Ones								
1	1								

<p>Count by ones.</p> <p>31 32 33 34 35 36 37 38 39 40</p>	<p>Subtract.</p> <p><math>5 - 0 = 5</math></p> <p><math>4 - 0 = 4</math></p> <p><math>3 - 0 = 3</math></p> <p><math>2 - 0 = 2</math></p>	<p>Write how many tens and ones.</p> <table border="1"> <tr> <td></td> <td></td> </tr> <tr> <td>Tens</td> <td>Ones</td> </tr> <tr> <td>1</td> <td>2</td> </tr> </table>			Tens	Ones	1	2	<p>Circle the number that is greater.</p> <p> 4</p>
Tens	Ones								
1	2								



# Preview

Please log in to download the printable version of this worksheet.

<p>Count by ones.</p> <p>51 52 53 54 55 56 57 58 59 60</p>	<p>Subtract.</p> <p><math>5 - 1 = 4</math></p> <p><math>4 - 1 = 3</math></p> <p><math>3 - 1 = 2</math></p> <p><math>2 - 1 = 1</math></p> <p><math>1 - 1 = 0</math></p>	<p>Write how many tens and ones.</p> <table border="1"> <tr> <td></td> <td></td> </tr> <tr> <td>Tens</td> <td>Ones</td> </tr> <tr> <td>1</td> <td>4</td> </tr> </table>			Tens	Ones	1	4	<p>Circle the number that is less.</p> <p>8 </p>
Tens	Ones								
1	4								

<p>Count by ones.</p> <p>61 62 63 64 65 66 67 68 69 70</p>	<p>Add.</p> <p><math>2 + 0 = 2</math></p> <p><math>2 + 1 = 3</math></p> <p><math>2 + 2 = 4</math></p> <p><math>2 + 3 = 5</math></p>	<p>Write how many tens and ones.</p> <table border="1"> <tr> <td></td> <td></td> </tr> <tr> <td>Tens</td> <td>Ones</td> </tr> <tr> <td>1</td> <td>5</td> </tr> </table>			Tens	Ones	1	5	<table border="1"> <tr> <td>Pizza</td> <td></td> </tr> <tr> <td>Burgers</td> <td></td> </tr> </table> <p>How many  ? <u>6</u></p> <p>How many  ? <u>4</u></p>	Pizza		Burgers	
Tens	Ones												
1	5												
Pizza													
Burgers													