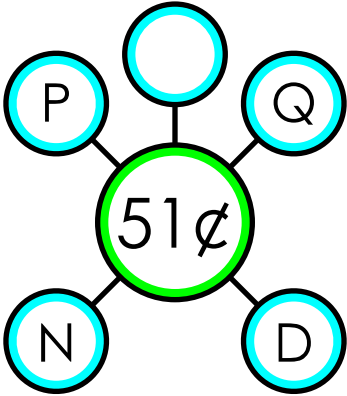


Name: _____

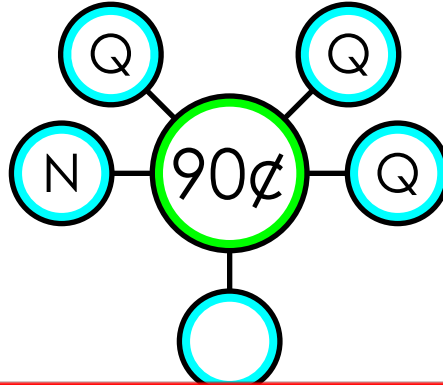
Money Bonds

The coins on the outside of each web add up to the total in the center. Write the correct coins in the empty circles.

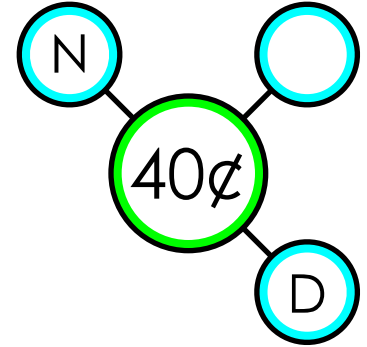
a.



b.



c.



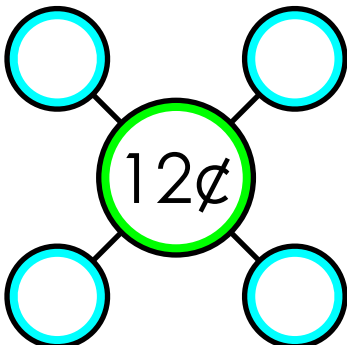
~ PREVIEW ~

Please log in or register to download the printable version of this worksheet.

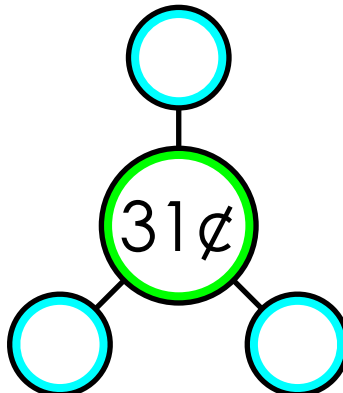


Complete the webs. Each circle will have exactly one coin.

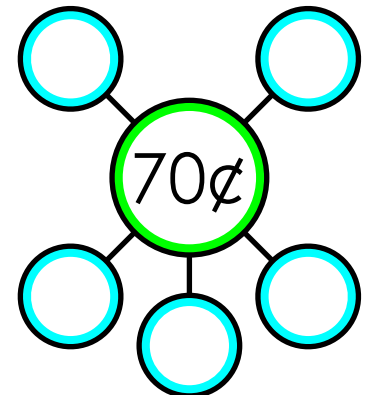
g.



h.



i.

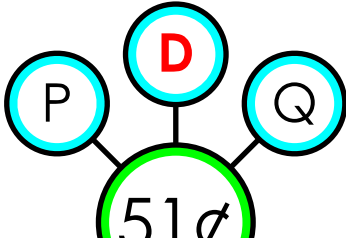


ANSWER KEY


Money Bonds

The coins on the outside of each web add up to the total in the center. Write the correct coins in the empty circles.


a.



b.



c.



~ PREVIEW ~

Please log in or register to download the printable version of this worksheet.