

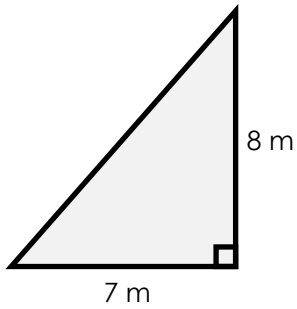
Name: _____

Area of a Triangle

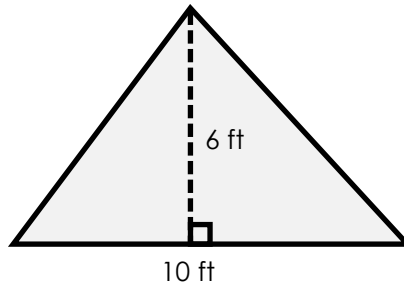
Formula: $A = \frac{1}{2} \times b \times h$

Find the area of each triangle.

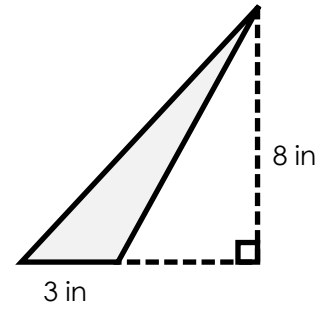
a.



b.

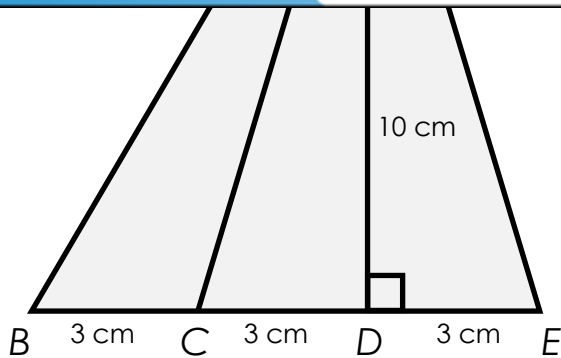


c.



Preview

Please log in to download the printable version of this worksheet.



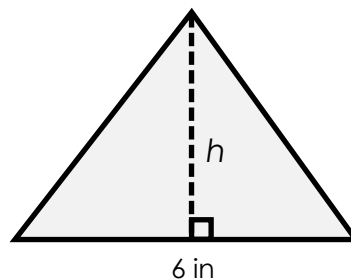
area = _____

f. Find the area of $\triangle BAE$

area = _____

g. Find the height of the triangle

height = _____



area = 12 in²

ANSWER KEY

Area of a Triangle

Formula: $A = \frac{1}{2} \times b \times h$

Find the area of each triangle.

a.



b.



c.

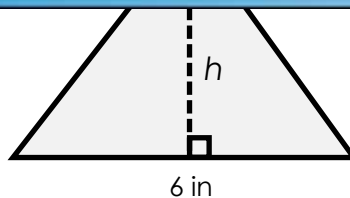


Preview

Please log in to download
the printable version of this worksheet.



height = 4 in



area = 12 in²