



Name: _____

Shape Addition



Find the sum of the numbers in the octagons.

Find the sum of the numbers in the circles.

Find the sum of the numbers in the hexagons.



Preview




Please log in to download the printable version of this worksheet.

Find the sum of the numbers in the squares.

Find the sum of the numbers in the trapezoids.

Find the sum of the numbers in the triangles.

Shape Addition



Find the sum of the numbers in the octagons.

Find the sum of the numbers in the circles.

Find the sum of the numbers in the hexagons.



Preview

Please log in to download the printable version of this worksheet.

Find the sum of the numbers in the squares.

$$\begin{array}{r}
 388 \\
 + 808 \\
 \hline
 1196
 \end{array}$$

Find the sum of the numbers in the trapezoids.

$$\begin{array}{r}
 229 \\
 + 683 \\
 \hline
 912
 \end{array}$$

Find the sum of the numbers in the triangles.

$$\begin{array}{r}
 31 \\
 + 699 \\
 \hline
 730
 \end{array}$$