

2-Digit Addition (With Regrouping)

Add


$$\begin{array}{r} 39 \\ +19 \\ \hline \end{array}$$

Add

Alana made 28 paper flowers.
Her mom makes her 23 more.
How many paper flowers does she have in all?
(show your work.)

Add

$$\begin{array}{r} 27 \\ +14 \\ \hline \end{array}$$



Preview

Please log in to download
the printable version of this worksheet.

Add

$$\begin{array}{r} 39 \\ +19 \\ \hline \end{array}$$

Add

$$\begin{array}{r} 39 \\ +19 \\ \hline \end{array}$$

Add


$$\begin{array}{r} 39 \\ +19 \\ \hline \end{array}$$

glue



Fold along this line.

Add



Preview

Please log in to download
the printable version of this worksheet.



Fold along this line.

Add

Alana made 28 paper flowers.

Her mom makes her 23 more.



Preview


Please log in to download
the printable version of this worksheet.

Answer: _____



Fold along this line.

Add



Preview

Please log in to download
the printable version of this worksheet.



Fold along this line.

Add

Savino has 48 paperclips.

His teacher gave him 16 more.



Preview


Please log in to download
the printable version of this worksheet.

Answer: _____



Fold along this line.

Add



Preview

Please log in to download
the printable version of this worksheet.



Fold along this line.

Add

Chantal has 35 stamps.
Roberto gave her 15 more.



Preview


Please log in to download
the printable version of this worksheet.

Answer: _____



Fold along this line.

Add



Preview

Please log in to download
the printable version of this worksheet.



Fold along this line.

Add

Mike picked 19 lemons.

Tom picked 14 more.



Preview


Please log in to download
the printable version of this worksheet.

Answer: _____



Fold along this line.

Add



Preview

Please log in to download
the printable version of this worksheet.



Fold along this line.

Add

Jordan has 52 pieces of sidewalk chalk.
Cemari has 29. How many pieces of



Preview


Please log in to download
the printable version of this worksheet.

Answer: _____



Fold along this line.

Add



Preview

Please log in to download
the printable version of this worksheet.



Fold along this line.

Add

Mrs. Jonas has 23 students in her class.

Mr. Jackman has 19.



Preview


Please log in to download
the printable version of this worksheet.

Answer: _____



Fold along this line.

Add



Preview

Please log in to download
the printable version of this worksheet.



Fold along this line.

Add

Han swam above water for 32 seconds.

He swam under water for 18 seconds.



Preview


Please log in to download
the printable version of this worksheet.

Answer: _____



Fold along this line.

Add



Preview

Please log in to download
the printable version of this worksheet.



Fold along this line.

Add

Aya read 56 pages of her book yesterday.
She read another 28 today.



Preview


Please log in to download
the printable version of this worksheet.

Answer: _____



Fold along this line.

Add



Preview

Please log in to download
the printable version of this worksheet.



Fold along this line.

Add

Dea had a jar filled with 66 candy corn.
Her mom added 14 more to the jar.



Preview


Please log in to download
the printable version of this worksheet.

Answer: _____



Fold along this line.

Add



Preview

Please log in to download
the printable version of this worksheet.



Fold along this line.

Add

Kotori has 18 white socks and 14 black socks.
How many socks does he have in all?



Preview


Please log in to download
the printable version of this worksheet.

Answer: _____



Fold along this line.

Add



Preview

Please log in to download
the printable version of this worksheet.



Fold along this line.

Add

Zara made 48 cupcakes.
Sonia made 24 cupcakes.



Preview


Please log in to download
the printable version of this worksheet.

Answer: _____



Fold along this line.

Add



Preview

Please log in to download
the printable version of this worksheet.



Fold along this line.

Add

Tony did 32 jumping jacks.

Nate did 28.



Preview


Please log in to download
the printable version of this worksheet.

Answer: _____



Fold along this line.

Add



Preview

Please log in to download
the printable version of this worksheet.



Fold along this line.

Add

Steve collected 25 sticks for the campfire.
Jamal collected 17.



Preview


Please log in to download
the printable version of this worksheet.

Answer: _____



Fold along this line.

Add



Preview

Please log in to download
the printable version of this worksheet.



Fold along this line.

Add

Angela picked 38 green beans in the garden.
Her brother picked 34.



Preview


Please log in to download
the printable version of this worksheet.

Answer: _____



Fold along this line.

Add



Preview

Please log in to download
the printable version of this worksheet.



Fold along this line.

Add

Abby collected 27 seashells.

Sam collected 14.



Preview

Please log in to download
the printable version of this worksheet.

Answer: _____