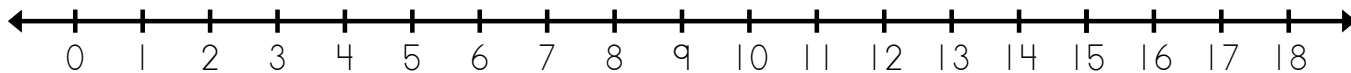


Name: _____

Number Line Addition

Use the number line to solve.



a. $6 + 3 = \underline{9}$

b. $8 + 8 = \underline{\quad}$

c. $4 + 7 = \underline{\quad}$

d. $5 + 5 = \underline{\quad}$

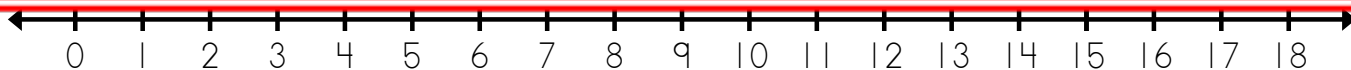
e. $3 + 9 = \underline{\quad}$

f. $1 + 6 = \underline{\quad}$



~ PREVIEW ~

Please log in or register to download the printable version of this worksheet.



j.
$$\begin{array}{r} 8 \\ + 8 \\ \hline 16 \end{array}$$

k.
$$\begin{array}{r} 6 \\ + 2 \\ \hline \end{array}$$

l.
$$\begin{array}{r} 2 \\ + 5 \\ \hline \end{array}$$

m.
$$\begin{array}{r} 3 \\ + 9 \\ \hline \end{array}$$

n.
$$\begin{array}{r} 7 \\ + 3 \\ \hline \end{array}$$

o.
$$\begin{array}{r} 1 \\ + 4 \\ \hline \end{array}$$

p.
$$\begin{array}{r} 4 \\ + 7 \\ \hline \end{array}$$

q.
$$\begin{array}{r} 9 \\ + 1 \\ \hline \end{array}$$

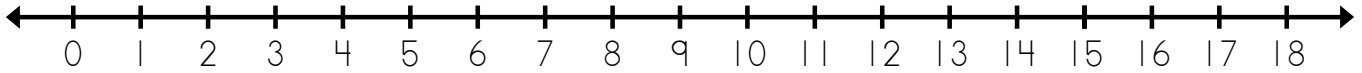
r.
$$\begin{array}{r} 5 \\ + 6 \\ \hline \end{array}$$

s.
$$\begin{array}{r} 6 \\ + 8 \\ \hline \end{array}$$

ANSWER KEY

Number Line Addition

Use the number line to solve.



a. $6 + 3 = \underline{9}$

b. $8 + 8 = \underline{16}$

c. $4 + 7 = \underline{11}$



~ PREVIEW ~

Please log in or register to download
the printable version of this worksheet.