

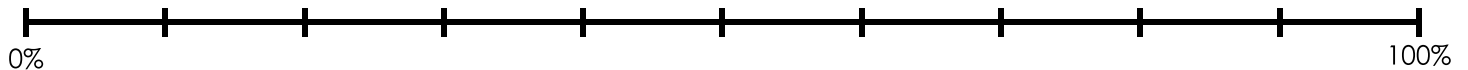
Name: _____

Double Number Lines

- a. Melinda collects antique glass bottles. She has 6 bottles made of blue glass. This is 20% of her bottle collection. How many bottles does she have altogether?

answer: _____

Number of Bottles



percent of bottle collection



Preview

Please log in to download the printable version of this worksheet.

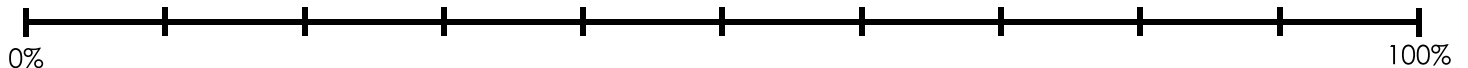
0% 100%

percent of tennis balls

- c. Dr. Molar is the best dentist in town. 60% of his patients are female. He has 120 female patients. How many patients does he have in all?

answer: _____

Number of Patients



percent of patients

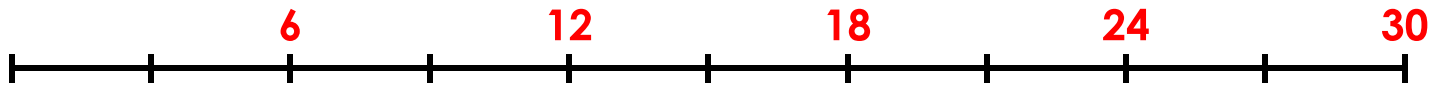
ANSWER KEY

Double Number Lines

- a. Melinda collects antique glass bottles. She has 6 bottles made of blue glass. This is 20% of her bottle collection. How many bottles does she have altogether?

answer: 30 bottles

Number of Bottles



Preview

Please log in to download the printable version of this worksheet.



percent of patients